

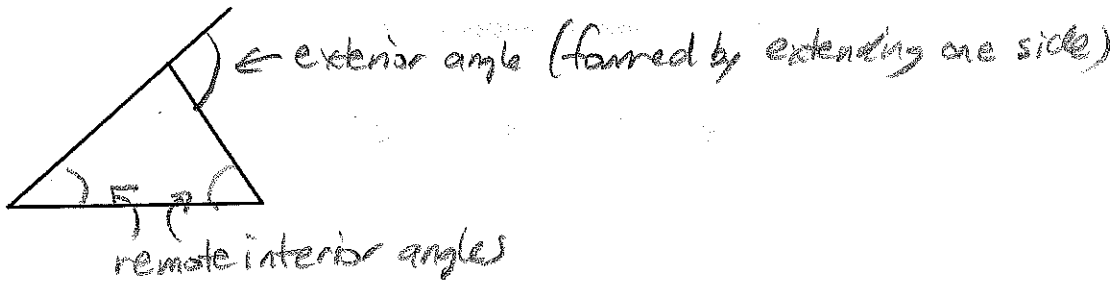
## Geometry, 5.2 Notes - Proving lines are parallel

(Book doesn't show this until 7.1) - The sum of the angles in a triangle =  $180^\circ$



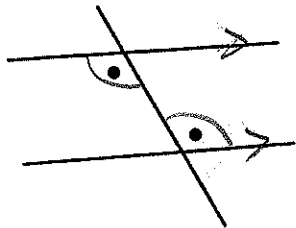
$$\begin{array}{r} 110 \\ 20 \\ \hline 130 \end{array} \qquad \begin{array}{r} 180 \\ 130 \\ \hline 50 \end{array}$$

**Exterior Angle Inequality Theorem:** The measure of an exterior angle of a triangle is greater than the measure of either remote interior angle.



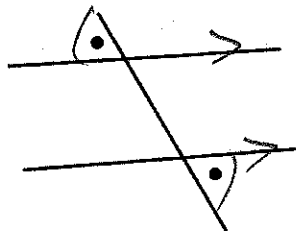
**6 ways to prove two lines are parallel:**

**Alternate interior angles are congruent**



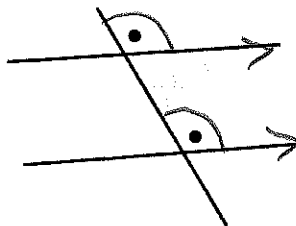
$$\text{Alt. int } \angle s \cong \Rightarrow \parallel \text{ lines}$$

**Alternate exterior angles are congruent**



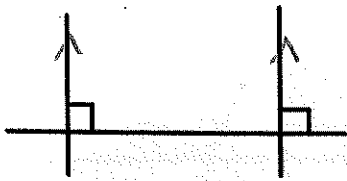
$$\text{Alt. ext } \angle s \cong \Rightarrow \parallel \text{ lines}$$

**Corresponding angles are congruent**



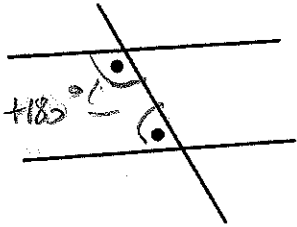
$$\text{Corr. } \angle s \cong \Rightarrow \parallel \text{ lines}$$

2 lines both perpendicular to a 3<sup>rd</sup> line



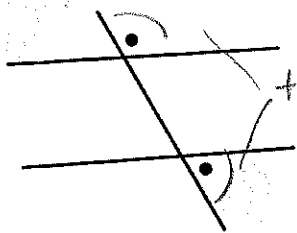
2 lines  $\perp$  to 3<sup>rd</sup> line  $\Rightarrow$   $\parallel$  lines

Same side interior angles are supplementary



Same side int  $\angle$ s supp.  $\Rightarrow$   $\parallel$  lines

Same side exterior angles are supplementary



Same side ext  $\angle$ s supp.  $\Rightarrow$   $\parallel$  lines

Practice: Which theorem proves the lines are parallel?

a

Corr.  $\angle$ s  $\cong$   $\Rightarrow$   $\parallel$  lines

b

Alt. int  $\angle$ s  $\cong$   $\Rightarrow$   $\parallel$  lines

c

Alt ext  $\angle$ s  $\cong$   $\Rightarrow$   $\parallel$  lines

a

Same side ext  $\angle$ s supp  
 $\Rightarrow$   $\parallel$  lines

b

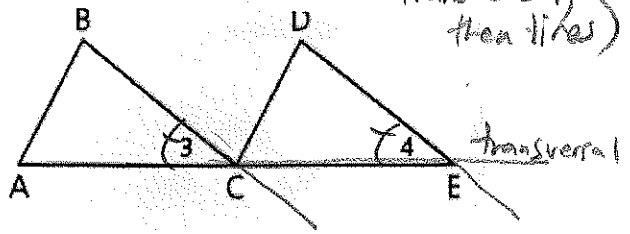
2 lines  $\perp$  to 3<sup>rd</sup> line  
 $\Rightarrow$   $\parallel$  lines

c

Same side int  $\angle$ s supp  $\Rightarrow$   $\parallel$  lines  
( $\angle 1$  supp. to  $\angle 2$ )

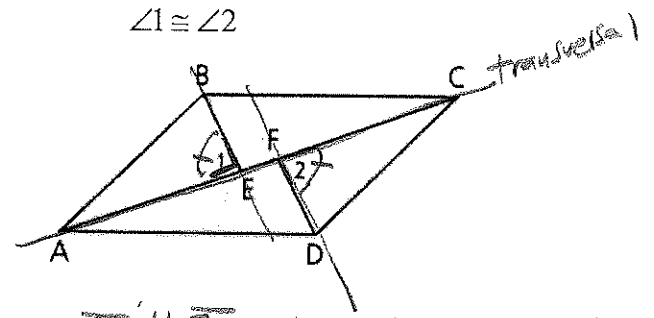
$\angle 3 \cong \angle 4$ :

(Identify common transversal, then lines)



$\overline{BC} \parallel \overline{DE}$  corr  $\angle s \cong \Rightarrow \parallel$  lines

$\angle 1 \cong \angle 2$



$\overline{BE} \parallel \overline{FD}$  Alt ext  $\angle s \cong \Rightarrow \parallel$  lines

## Geometry, 5.3 Notes – Euclid's 5 Postulates, Congruent angles and parallel lines

Euclid (~300 B.C.) – the 'Father of Geometry' stated 5 postulates that form the basis of geometry.

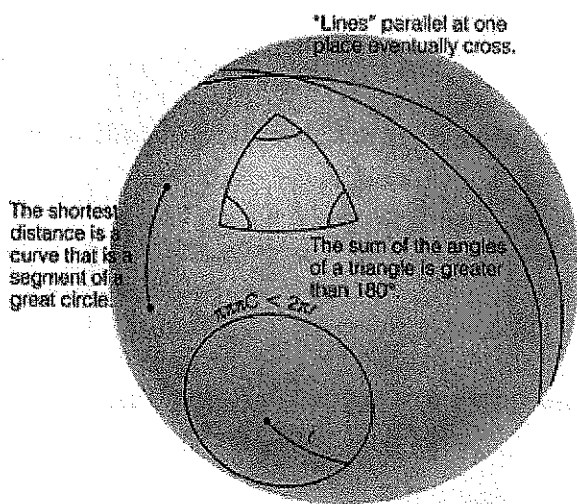
- 1) A straight line segment can be drawn joining any two points.
- 2) Any straight line segment can be extended indefinitely in a straight line.
- 3) Given any straight line segment, a circle can be drawn having the segment as radius and one endpoint as center.
- 4) All right angles are congruent.
- 5) If two lines are drawn which intersect a third in such a way that the sum of the inner angles on one side is less than two right angles, then the two lines must intersect each other on that side if extended far enough.

The last one is known as 'the parallel postulate', because it can be restated as:

Parallel postulate: Through a point not on a line there is exactly one parallel to the given line.

These postulates form the basis of geometry and the first 4 are provable, but the 5<sup>th</sup> postulate has never been proven. Instead, you get different 'geometries' depending upon if you assume it is true or not true. In our class, we assume it is true, so we are studying 'Euclidean Geometry' or 'planar Geometry', because this is the geometry of lines and shapes on a plane.

Other geometries are possible – for example, spherical geometry (geometry on a sphere):




In spherical geometry, rules are different....

A triangle can have 3 right angles.

The shortest distance isn't a straight line it is a curve (known as a great circle)...these are the paths pilots fly when crossing the ocean.

But...in our class, we assume we are not on a sphere, but on a plane, so for us the parallel postulate is true.

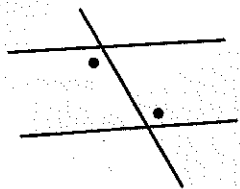
Parallel postulate: Through a point not on a line there is exactly one parallel to the given line.



Tick mark for showing 2 lines are parallel:

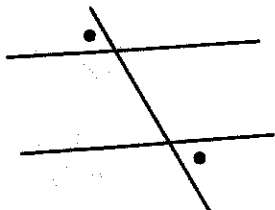
5 theorems about parallel lines cut by a transversal

**Alternate interior angles are congruent**



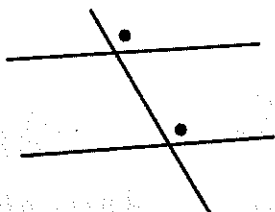
$\parallel$  lines  $\Rightarrow$  alt. int.  $\angle$ 's  $\cong$

**Alternate exterior angles are congruent**




$\parallel$  lines  $\Rightarrow$  alt. ext.  $\angle$ 's  $\cong$

**Corresponding angles are congruent**



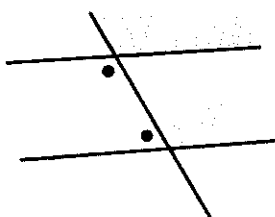
$\parallel$  lines  $\Rightarrow$  corr.  $\angle$ 's  $\cong$

**A line that is perpendicular to one of two parallel lines is perpendicular to the other**



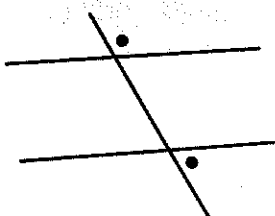
line  $\perp$  to 1 of 2  $\parallel$  lines  $\Rightarrow \perp$  to other

**Same side interior angles are supplementary**



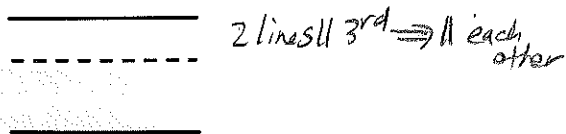
$\parallel$  lines  $\Rightarrow$  same side int.  $\angle$ 's supp.

**Same side exterior angles are supplementary**



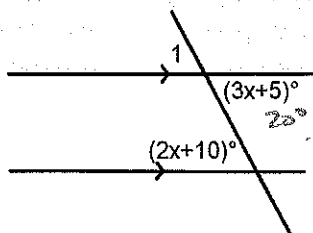
$\parallel$  lines  $\Rightarrow$  same side ext.  $\angle$ 's supp.

One more theorem: If 2 lines are parallel to a 3<sup>rd</sup> line, they are parallel to each other.



Practice:

1) Find  $m\angle 1$



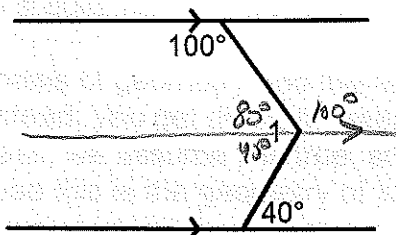
|| lines  $\Rightarrow$  alt int  $\angle$ s  $\cong$  so

$$\begin{array}{r} 3x+5 = 2x+10 \\ -2x \quad -2x \\ \hline x+5 = 10 \\ -5 \quad -5 \\ \hline x = 5 \end{array}$$

$$3x+5 = 3(5)+5 = 20$$

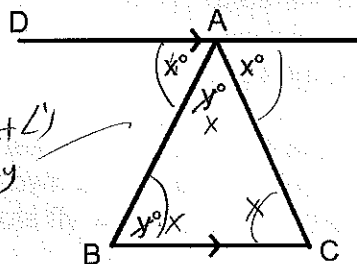
$$m\angle 1 = 20^\circ \text{ (vertical } \angle\text{s)}$$

2) Find  $m\angle 1$



$$m\angle 1 = 120^\circ$$

3) If  $\overline{DA} \parallel \overline{BC}$ , is  $\triangle ABC$  equilateral? Find  $m\angle DAB$



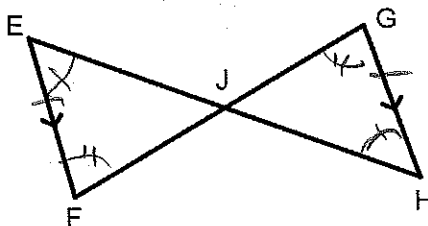
alt int  $\angle$ s  
so  $x=y$

$\triangle ABC \Rightarrow \triangle ABC$   
yes, equilateral.

$$m\angle DAB = x = \frac{180}{3} = 60^\circ$$

4) Given:  $\overline{EF} \parallel \overline{GH}$   
 $\overline{EF} \cong \overline{GH}$

Prove:  $\overline{EJ} \cong \overline{JH}$



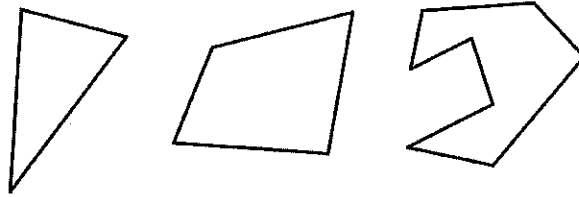
1.  $\overline{EF} \parallel \overline{GH}$ ,  $\overline{EF} \cong \overline{GH}$
2.  $\angle E \cong \angle H$
3.  $\angle F \cong \angle G$
4.  $\triangle EBF \cong \triangle GCH$
5.  $\overline{EJ} \cong \overline{JH}$

1. Given
2. || lines  $\Rightarrow$  alt int  $\angle$ s  $\cong$
3. || lines  $\Rightarrow$  alt int  $\angle$ s  $\cong$
4. ASA
5. CPCTC

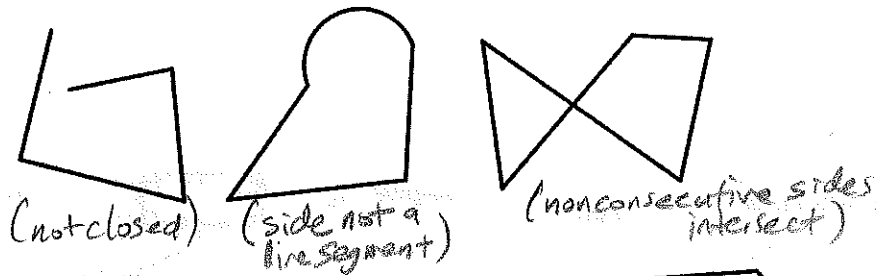
# Geometry, 5.4 ~~day 1~~ Notes – 4-sided Polygons

**Polygon** – a closed, plane (flat) figure with straight sides (consecutive sides intersect at endpoints.)

Examples of polygons:

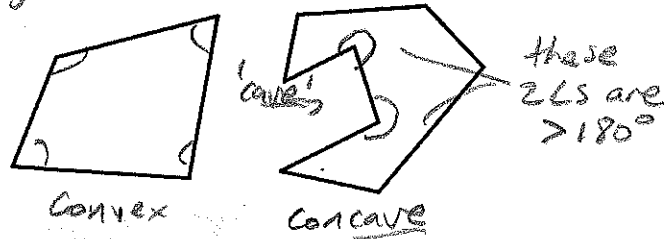


Not polygons:

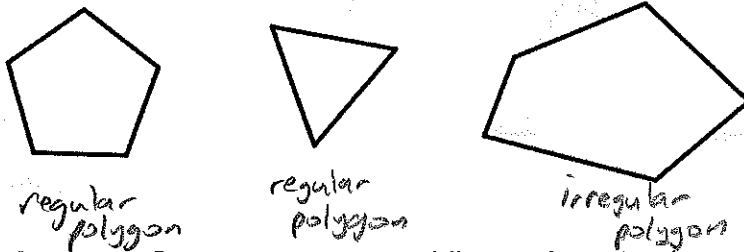


**Convex and Concave polygons:**

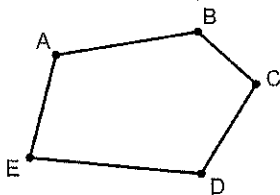
Convex = interior angles all  $< 180^\circ$ .



**Regular polygons** – a polygon whose sides are all congruent.

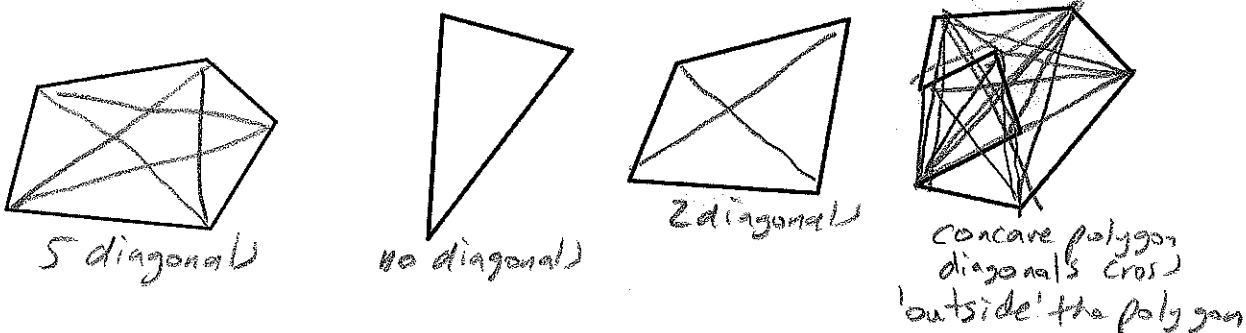


**Naming polygons:** Start at a vertex and list each vertex in consecutive order (can go either clockwise or counterclockwise.)

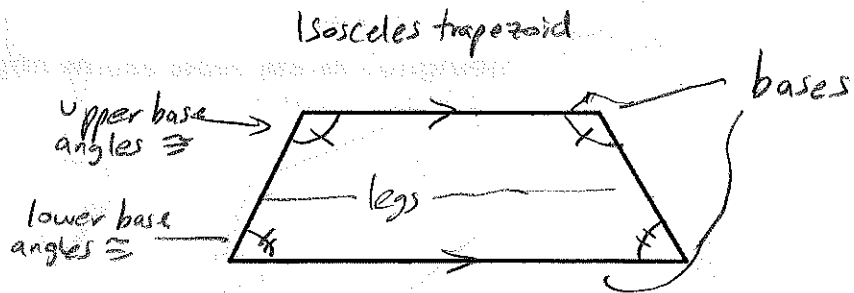
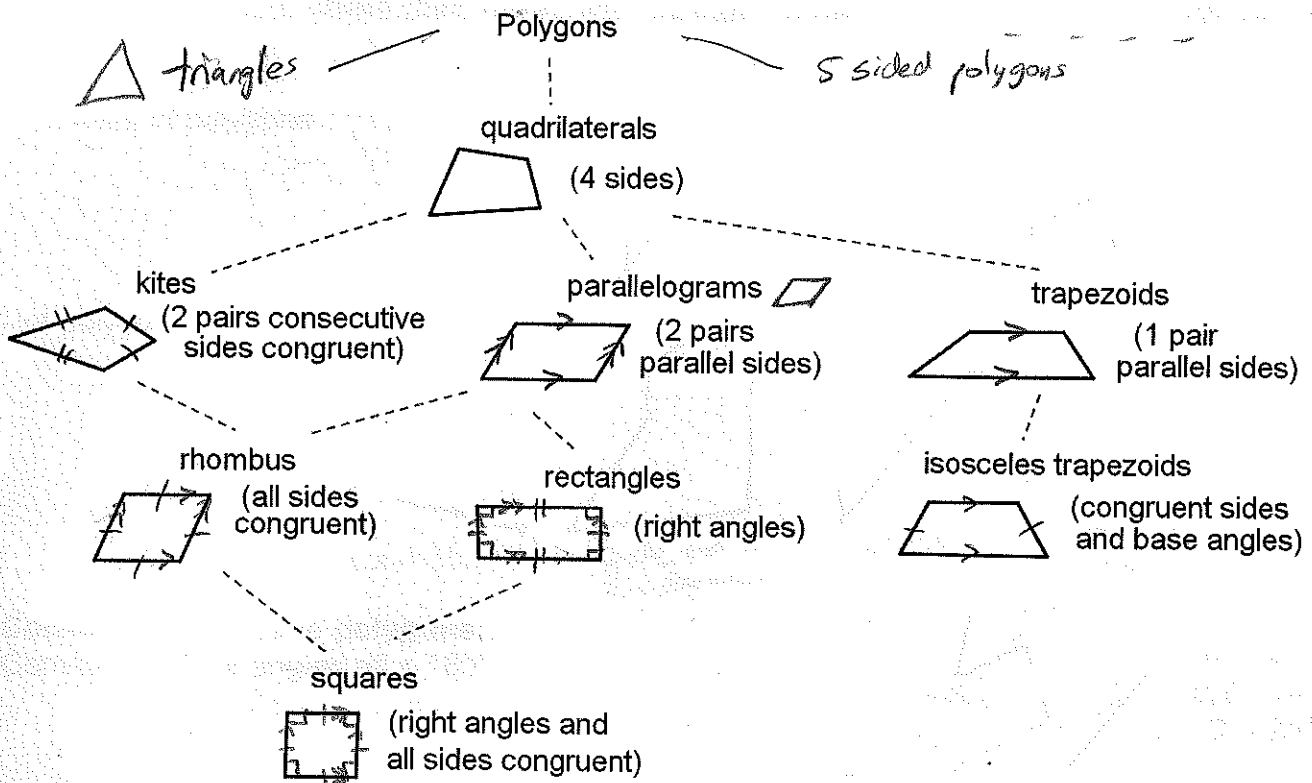


Possible names: polygon ABCDE  
 polygon CBAED  
 polygon EABCD

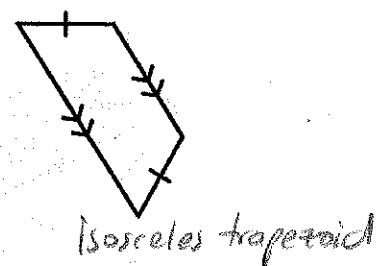
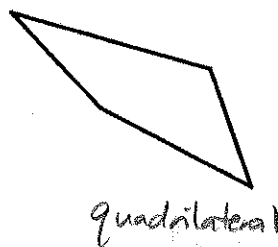
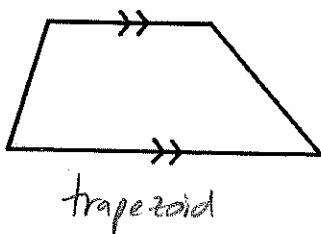
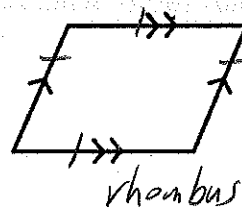
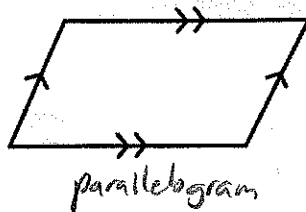
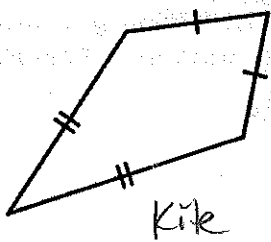
**Diagonals of polygons:** A line segment connecting two non-consecutive (non-adjacent) vertices of the polygon.



# Geometry, 5.4 ~~day~~ Notes - Classifying 4-sided Polygons



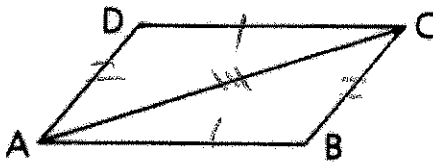
Practices: Identify the polygon...





# Geometry, 5.5 day 1 Notes - Properties of Quadrilaterals

Given:  $\square ABCD$   
 Prove:  $\triangle ABC \cong \triangle CDA$



- S
- 
1.  $\square ABCD$
  2.  $\overline{DC} \cong \overline{BA}$
  3.  $\overline{AD} \cong \overline{CB}$
  4.  $\overline{AC} \cong \overline{CA}$
  5.  $\triangle ABC \cong \triangle CDA$

- R
- 
1. Given
  2.  $\square$  opp sides  $\cong$
  3.  $\square$  opp sides  $\cong$
  4. Reflexive prop.
  5. SSS

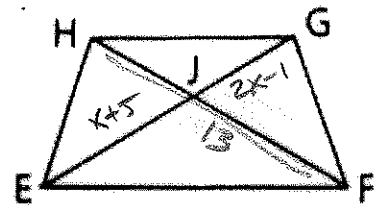
Given: EFGH is an isosceles trapezoid with legs  $\overline{HE}$  and  $\overline{GF}$

$$EJ = x + 5$$

$$JG = 2x - 1$$

$$HF = 13$$

Find: EJ, JG, and HJ.



isos. trap. diags  $\cong$

$$x + 5 + 2x - 1 = 13$$

$$3x + 4 = 13$$

$$3x = 9$$

$$x = 3$$

$$EJ = x + 5 = 3 + 5 = \boxed{8}$$

$$JG = 2x - 1 = 2(3) - 1 = \boxed{5}$$

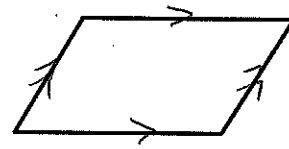
$$HF = 13 = \boxed{13}$$

# Geometry, 5.6 Notes – Proving a quadrilateral is a parallelogram

There are 5 ways to prove a quadrilateral is a parallelogram:

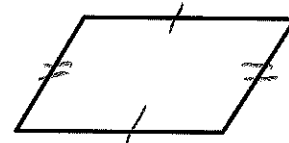
1. If both pairs of opposite sides are parallel.

*both pairs opp. sides  $\parallel \Rightarrow \square$*



2. If both pairs of opposite sides are congruent.

*both pairs opp. sides  $\cong \Rightarrow \square$*



3. If one pair of opposite sides are parallel and congruent.

*one pair opp. sides  $\parallel \& \cong \Rightarrow \square$*




4. If the diagonals bisect each other.

*diagonals bisect  $\Rightarrow \square$*



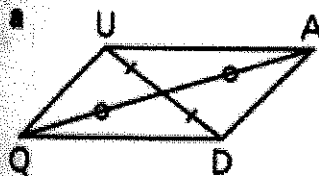
5. If both pairs of opposite angles are congruent.

*both pairs opp.  $\angle$ s  $\cong \Rightarrow \square$*

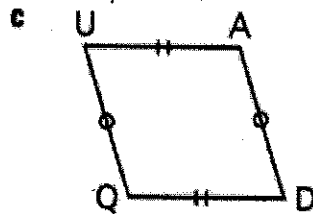


For each quadrilateral, state how you know it is a parallelogram:

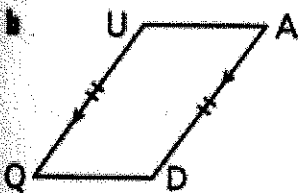
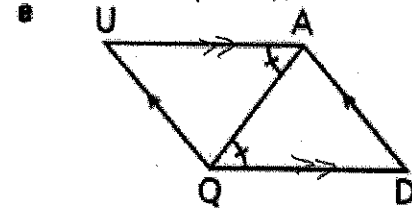
*diagonals bisect  $\Rightarrow \square$*



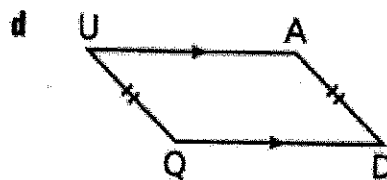
*both pairs opp. sides  $\cong \Rightarrow \square$*



*both pairs opp. sides  $\parallel \Rightarrow \square$*



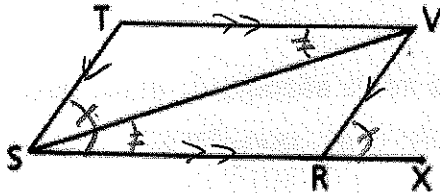
*one pair opp. sides  $\parallel \& \cong \Rightarrow \square$*



*can't say  $\square$*

Given:  $\angle XRV \cong \angle RST$   
 $\angle RSV \cong \angle TVS$

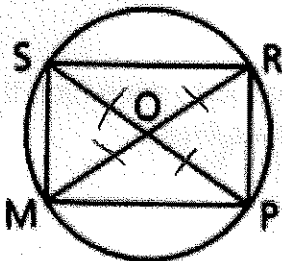
Prove:  $RSTV$  is a  $\square$



S	R
1. $\angle XRV \cong \angle RST$	1. Given
2. $\angle RSV \cong \angle TVS$	2. Given
3. $\overline{TS} \parallel \overline{VR}$	3. corr. $\angle$ 's $\Rightarrow \parallel$ lines
4. $\overline{TV} \parallel \overline{SR}$	4. alt int. $\angle$ 's $\Rightarrow \parallel$ lines
5. $RSTV \square$	5. both pairs opp. sides $\parallel \Rightarrow \square$

Given:  $\odot O$

Prove:  $MPRS$  is a  $\square$



S	R
1. $\odot O$	1. Given
2. $\overline{OS} \cong \overline{OR} \cong \overline{OP} \cong \overline{OM}$	2. radii $\cong$
3. $\overline{SP}$ bis. $\overline{MR}$	3. def. of bisect
4. $\overline{RM}$ bis. $\overline{PS}$	4. def. of bisect
5. $MPRS$ is $\square$	5. diagonals bisect $\Rightarrow \square$

# Geometry, 5.7 Notes – Proving figures are special quadrilaterals

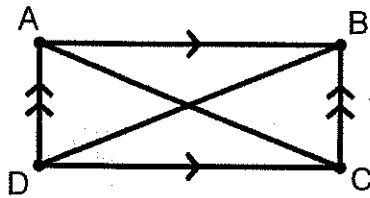
Proving a quadrilateral is a rectangle:

- show is a  $\square$  (parallelogram), then:
  - show at least one right angle, or
  - show diagonals are  $\cong$

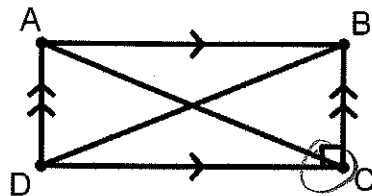


- or -
- show all 4 angles are right angle

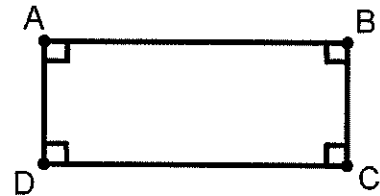
Are these rectangles? How do you know?



$\overline{AC} \cong \overline{BD}$   
 $\square$  w/  $\cong$  diagonals



$\square$  w/ right angle

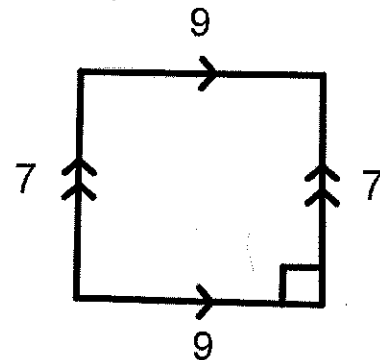


all right angles

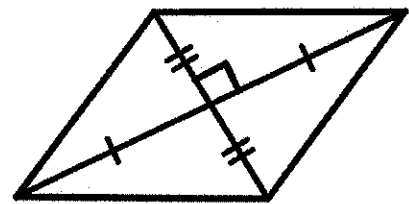
Use the reference sheet for proving a quadrilateral is a parallelogram, rectangle, kite, rhombus, square or isosceles trapezoid.

Examples: What is the most descriptive term for the shape? How do you know?

- parallelogram? yes (2 pairs opp sides  $\parallel \rightarrow \square$ )
- rectangle? yes ( $\square$  w/ rt angle)
- rhombus? no (sides not all  $\cong$ )
- square? no (not a rhombus, sides not equal)



- parallelogram? yes (diagonals bisect each other)
- rectangle? no (diagonals  $\neq$ , no right angle)
- rhombus? yes (diagonals  $\perp$  bis of each other)
- square? no (not a rectangle)



If  $\overline{AB} \cong \overline{DC}$  show ABCD is not a rhombus:

$$AB = DC$$

$$\begin{array}{r} 2x+5 = 4x-17 \\ -2x \quad -2x \\ \hline 5 = 2x-17 \\ +12 \quad +12 \\ \hline 22 = 2x \\ \frac{22}{2} = \frac{2x}{2} \\ 11 = x \end{array}$$

$\overline{BC} \cong \overline{AD}$   
 (not all sides are equal)

