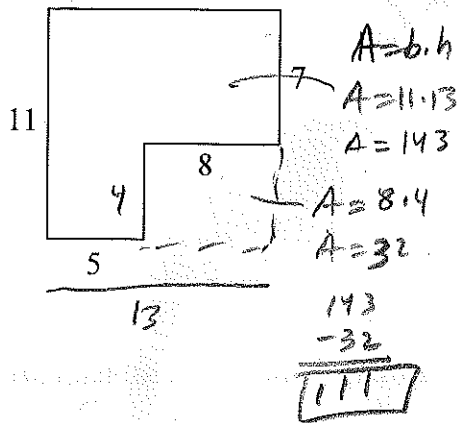


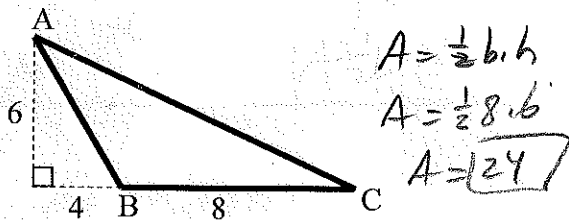
Geometry 11.1 - 11.5 Worksheet

Name Key


1. Find the area of the diagram.
(assume right angles)



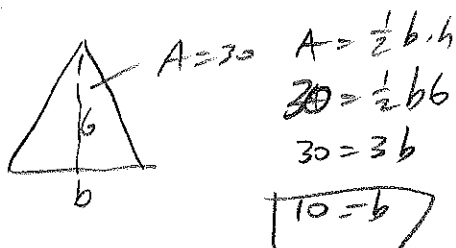
2. Find the area of $\triangle ABC$.



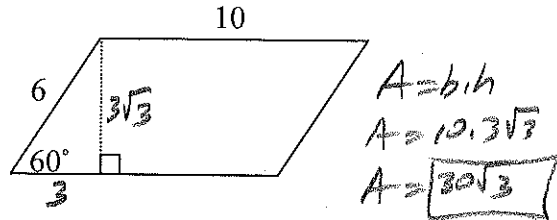
3. Find the area of a rectangle with a base 24 and a diagonal of 25.




4. Find the base of a triangle whose altitude is 6 and whose area is 30.



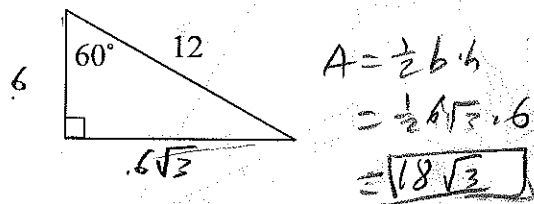
5. Find the area of the parallelogram.



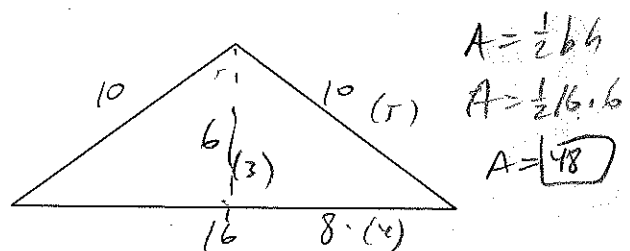
6. Find the perimeter of a square whose area is 25.



7. Find the area of the triangle.

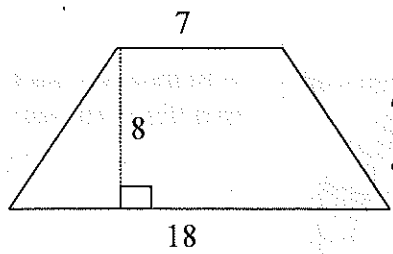


8. Find the area of an isosceles triangle with sides 10, 10, and 16.



31
6
186

9. Find the area of the trapezoid.

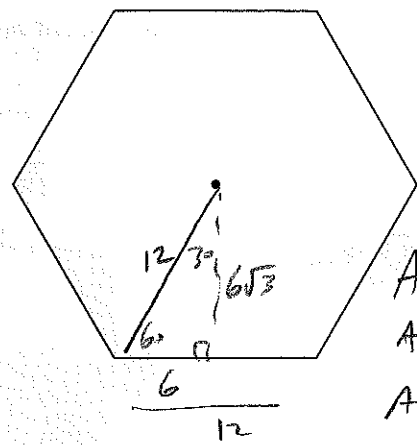


$$A = \frac{1}{2}h(b_1 + b_2)$$

$$A = \frac{1}{2} \cdot 8(7 + 18)$$

$$A = 100$$

12. Find the area of the regular hexagon with a radius of 12.

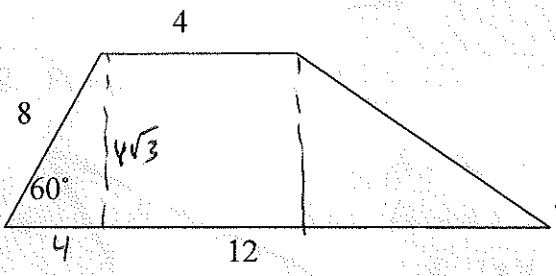


$$A = \frac{1}{2}ap$$

$$A = \frac{1}{2} \cdot 6 \cdot 12 \cdot 6$$

$$A = 216\sqrt{3}$$

10. Find the area of the trapezoid.

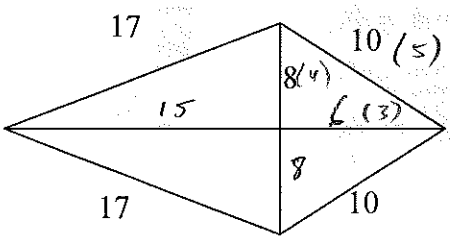


$$A = \frac{1}{2}h(b_1 + b_2)$$

$$A = \frac{1}{2} \cdot 4\sqrt{3}(4 + 12)$$

$$A = 32\sqrt{3}$$

11. Find the area of the kite.

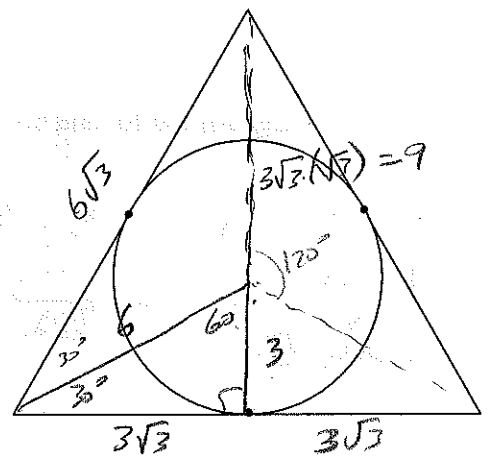


$$A = \frac{1}{2}d_1d_2$$

$$A = \frac{1}{2} \cdot 16 \cdot 21$$

$$A = 168$$

13. Find the area of the equilateral triangle if the radius of its inscribed circle is 3.



$$A = \frac{1}{2} \cdot 6\sqrt{3} \cdot 9 = 27\sqrt{3}$$

or formula

$$A = \frac{s^2}{4}\sqrt{3} = \frac{(6\sqrt{3})^2}{4}\sqrt{3}$$

$$= \frac{36 \cdot 3}{4}\sqrt{3}$$

$$= 27\sqrt{3}$$

$$2 \sqrt{\frac{36}{12}} = 2 \sqrt{3} = 2\sqrt{3}$$

$$\frac{12}{6} = 2$$

$$\frac{1}{2} \cdot 6\sqrt{3} \cdot 72$$

$$= 3\sqrt{3} \cdot 72$$

$$= 216\sqrt{3}$$

Geometry
Review Worksheet 11.1-11.6

Name Key
Date _____ Period _____

For #1-7, find the **area** of each figure. Write down the formula used.

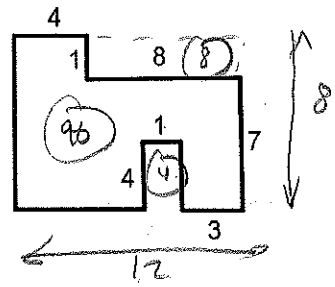
#1. Find the area of the figure. Assume right angles.

$$A = b \cdot h$$

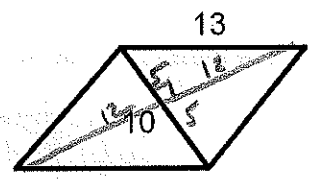
$$A = 12 \cdot 8 = 96$$

$$\begin{array}{r} 12 \\ \times 8 \\ \hline 96 \end{array}$$

84 u^2



#2. Rhombus.



$$d_1 = 10$$

$$d_2 = 24$$

$$A = \frac{1}{2} d_1 d_2$$

$$A = \frac{1}{2} (10)(24)$$

$$A = 10 \cdot 12 = 120 \text{ u}^2$$

#3. A kite is to be constructed using two sticks measuring 5 and 10 inches.

$$d_1 = 5 \text{ in}$$

$$d_2 = 10 \text{ in}$$

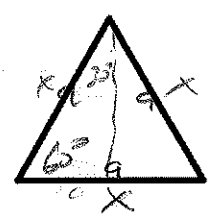
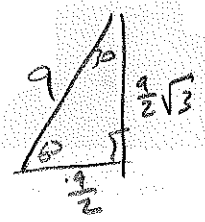
$$A = \frac{1}{2} d_1 d_2 = \frac{1}{2} (5)(10) = 25 \text{ in}^2$$

#4. An equilateral triangle whose perimeter is 27.

$$A = \frac{1}{2} b h$$

$$A = \frac{1}{2} (9) \left(\frac{9\sqrt{3}}{2} \right)$$

$$A = \frac{81}{4} \sqrt{3} \text{ u}^2$$



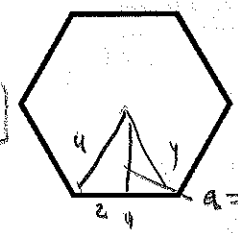
$$3x = 27$$

$$x = 9$$

#5. A regular hexagon whose radius is 4.

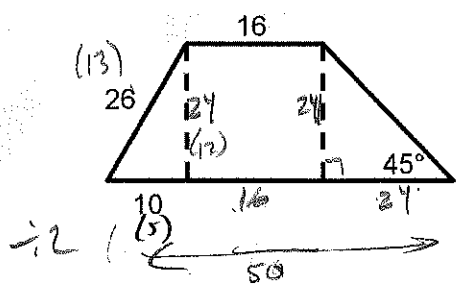
$$A = \frac{1}{2} a p$$

$$A = \frac{1}{2} (2\sqrt{3})(24) = 24\sqrt{3} \text{ u}^2$$



$$P = 6 \cdot 4 = 24$$

#6. Trapezoid.



$$A = \frac{1}{2} h (b_1 + b_2)$$

$$A = \frac{1}{2} (24)(16 + 50)$$

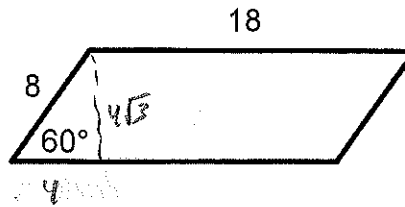
$$A = 12(66)$$

$$A = 792 \text{ u}^2$$

$$\begin{array}{r} 66 \\ \times 12 \\ \hline 132 \\ 66 \\ \hline 792 \end{array}$$

Parallelogram.

$$\begin{array}{r} 3 \cdot 18 \\ \times 2 \\ \hline 72 \end{array}$$



$$A = b \cdot h$$

$$A = 18 \cdot 4\sqrt{3}$$

$$A = 72\sqrt{3} \text{ u}^2$$

#8. If the right triangle has an area of 50, find AC.

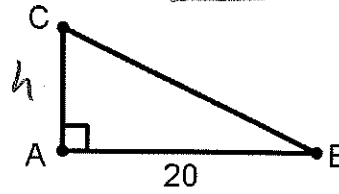
$$A = \frac{1}{2} b \cdot h$$

$$50 = \frac{1}{2} 20 \cdot h$$

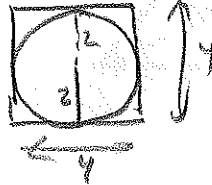
$$\frac{50}{10} = \frac{10h}{10}$$

$$5 = h$$

$$AC = h = \boxed{5}$$



#9. Find the area of a square circumscribed about a circle whose radius is 2. (draw a picture)



$$A = b \cdot h$$

$$A = 4 \cdot 4$$

$$A = 16 \text{ u}^2$$

#10. The circumference of a circle is 24π . Find the area of the circle.

$$C = 2\pi r$$

$$24\pi = 2\pi r$$

$$24 = \frac{2r}{2}$$

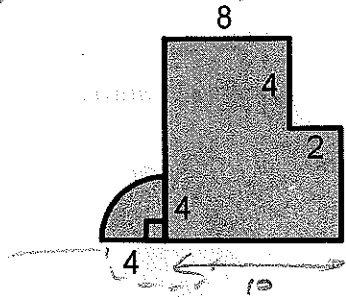
$$12 = r$$

$$A = \pi r^2$$

$$A = \pi 12^2$$

$$A = 144\pi \text{ u}^2$$

#11. Find the shaded area.



$$A_{\text{big rect}} = b \cdot h = 10 \cdot 10 = 100 \text{ u}^2$$

$$A_{\text{little rect}} = b \cdot h = 4 \cdot 2 = 8 \text{ u}^2$$

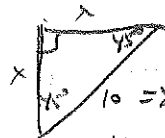
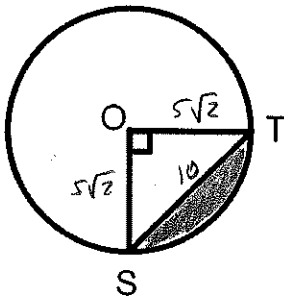
$$A_{\text{sector}} = \frac{1}{4} (\pi r^2) = \frac{1}{4} (\pi 4^2) = \frac{16\pi}{4} = 4\pi \text{ u}^2$$

$$A_{\text{total}} = (A_{\text{big rect}} - A_{\text{little rect}}) + A_{\text{sector}}$$

$$= (100 - 8) + 4\pi$$

$$= \boxed{92 + 4\pi \text{ u}^2}$$

#12. Find the area of the shaded segment if $ST=10$



$$10 = x\sqrt{2}$$

$$x = \frac{10}{\sqrt{2}} = \frac{10\sqrt{2}}{2} = 5\sqrt{2}$$

$$A_{\text{segment}} = A_{\text{sector}} - A_{\text{triangle}}$$

$$= \left(\frac{1}{4}\right) (\pi (5\sqrt{2})^2) - \frac{1}{2} (5\sqrt{2})(5\sqrt{2})$$

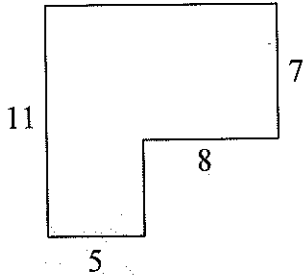
$$= \frac{1}{4} \pi 25 \cdot 2 - \frac{1}{2} 25 \cdot 2$$

$$= \boxed{\frac{25\pi}{2} - 25 \text{ u}^2}$$

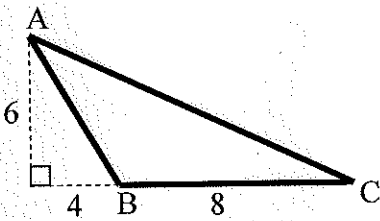
Geometry 11.1 – 11.5 Worksheet

Name _____

1. Find the area of the diagram.
(assume right angles)



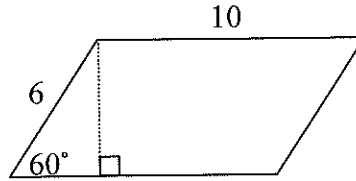
2. Find the area of $\triangle ABC$.



3. Find the area of a rectangle with a base 24 and a diagonal of 25.

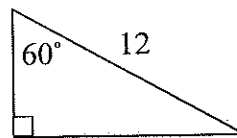
4. Find the base of a triangle whose altitude is 6 and whose area is 30.

5. Find the area of the parallelogram.



6. Find the perimeter of a square whose area is 25.

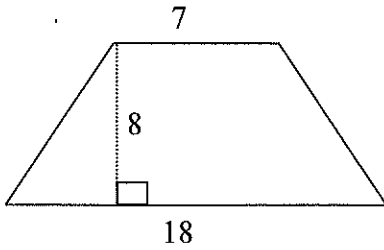
7. Find the area of the triangle.



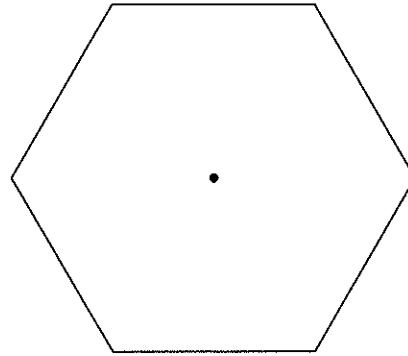
8. Find the area of an isosceles triangle with sides 10, 10, and 16.



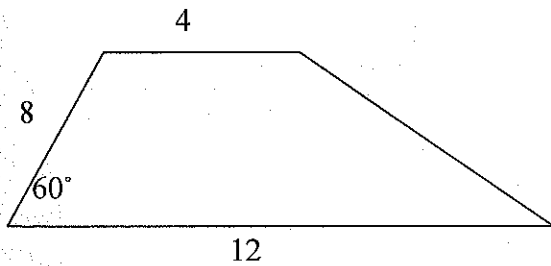
9. Find the area of the trapezoid.



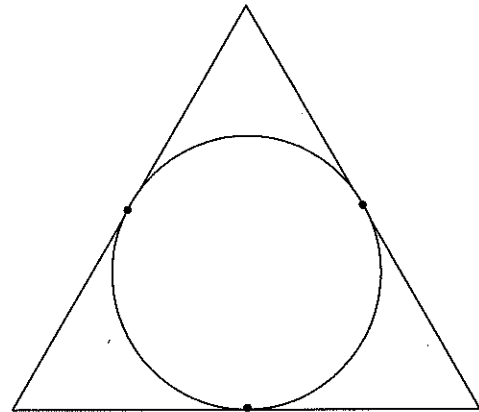
12. Find the area of the regular hexagon with a radius of 12.



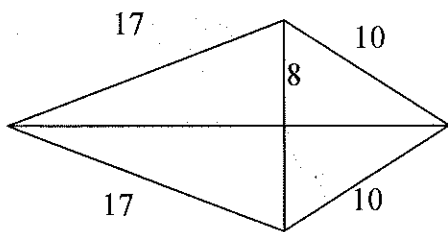
10. Find the area of the trapezoid.



13. Find the area of the equilateral triangle if the radius of its inscribed circle is 3.



11. Find the area of the kite.

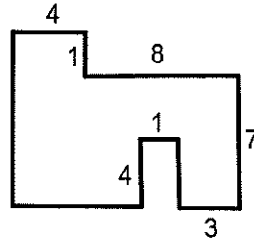


Geometry
Review Worksheet 11.1-11.6

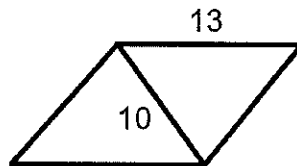
Name _____
Date _____ Period _____

For #1-7, find the **area** of each figure. Write down the formula used.

#1. Find the area of the figure. Assume right angles.



#2. Rhombus.

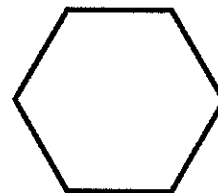


#3. A kite is to be constructed using two sticks measuring 5 and 10 inches.

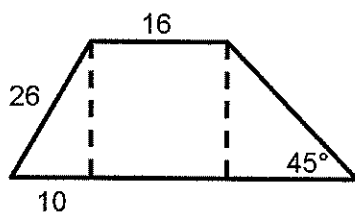
#4. An equilateral triangle whose perimeter is 27.



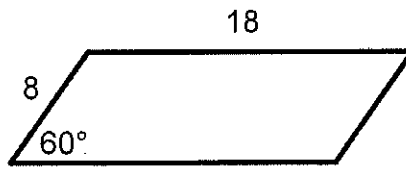
#5. A regular hexagon whose radius is 4.



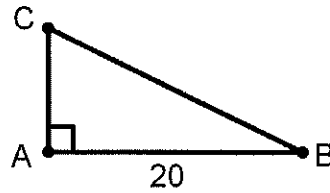
#6. Trapezoid.



#7. Parallelogram.



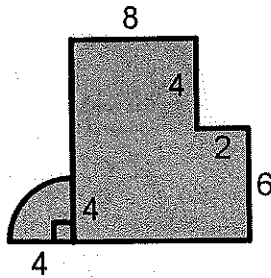
#8. If the right triangle has an area of 50, find AC.



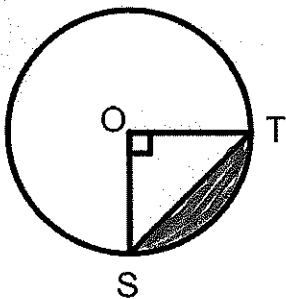
#9. Find the area of a square circumscribed about a circle whose radius is 2. (draw a picture)

#10. The circumference of a circle is 24π . Find the area of the circle.

#11. Find the shaded area.



#12. Find the area of the shaded segment if $ST=10$



Answer Key:

#1. 84 units^2

#7. $72\sqrt{3} \text{ units}^2$

#2. 120 units^2

#8. 5

#3. 25 in^2

#9. 16 units^2

#4. $\frac{81\sqrt{3}}{4} \text{ units}^2$

#10. $144\pi \text{ units}^2$

#5. $24\sqrt{3} \text{ units}^2$

#11. $92 + 4\pi \text{ units}^2$

#6. 792 units^2

#12. $\frac{25\pi}{2} - 25 \text{ units}^2$