

HA1934 2012-2013 Fall final review (multiple choice) key

(1a)  $2x^2 - 7x - 15$

M	A
-30	-7
(10)(3)	-10+3

$$\frac{(2x-10)(2x+3)}{2 \quad 1}$$

$(x-5)(2x+3)$  **B**

(1b)  $25x^2 - 81y^2$

$$(a^2 - b^2)$$

$$(5x)^2 - (9y)^2$$

$(5x+9y)(5x-9y)$  **D**

(2)  $10x^2 - 13x = 3$

$$10x^2 - 13x - 3 = 0$$

M	A
-30	-3
(15)(2)	-15+2

$$\frac{(10x-15)(10x+2)}{5 \quad 2}$$

$$(2x-3)(5x+1) = 0$$

$$2x-3=0 \quad 5x+1=0$$

$$2x=3 \quad 5x=-1$$

$x = \frac{3}{2} \quad x = -\frac{1}{5}$  **D**

(3)  $2x^2 - 6x + 3 = 0$

quadratic formula  $a=2, b=-6, c=3$

$$x = \frac{-(-6) \pm \sqrt{(-6)^2 - 4(2)(3)}}{2(2)}$$

$$x = \frac{6 \pm \sqrt{36 - 24}}{4}$$

$$x = \frac{6 \pm \sqrt{12}}{4} = \frac{6 \pm \sqrt{4}\sqrt{3}}{4}$$

$$x = \frac{6 \pm 2\sqrt{3}}{4} = \frac{2(3 \pm \sqrt{3})}{2(2)}$$

$x = \frac{3 \pm \sqrt{3}}{2}, C$

(4)  $(2x+6)^2 = 28$

$$\sqrt{(2x+6)^2} = \pm\sqrt{28}$$

$$2x+6 = \pm\sqrt{4}\sqrt{7}$$

$$2x+6 = \pm 2\sqrt{7}$$

$$2x = -6 \pm 2\sqrt{7}$$

$x = -3 \pm \sqrt{7}, A$

(5)  $\sqrt{2x+7} - x = 2$

$$\sqrt{2x+7} = x+2$$

$$(\sqrt{2x+7})^2 = (x+2)^2$$

note:  $(x+2)^2 \neq x^2 + 4$ !

$$2x+7 = x^2 + 4x + 4$$

$$-x^2 - 2x - 7 = 0$$

M	A
-3	2
(3)(-1)	3-1

$$x^2 + 2x - 3 = 0$$

$$(x+3)(x-1) = 0$$

$$x+3=0 \quad x-1=0$$

$x = -3 \quad x = 1$

(6)  $\sqrt{x-16} - 1 = 2$

$$\sqrt{x-16} = 3$$

$$(\sqrt{x-16})^2 = (3)^2$$

$$x-16 = 9$$

$$x = 25$$

checking:  $\sqrt{(25)-16} - 1 = 2$

$$\sqrt{9} - 1 = 2$$

$$3 - 1 = 2$$

$$2 = 2$$

$x = 25, D$

checking:

$$\sqrt{2(-3)+7} - (-3) \stackrel{?}{=} 2$$

$$\sqrt{-6+7} + 3 = 2$$

$$\sqrt{1} + 3 = 2$$

$$4 = 2$$

no  
(extraneous)

$$\sqrt{2(1)+7} - (1) \stackrel{?}{=} 2$$

$$\sqrt{9} - 1 = 2$$

$$3 - 1 = 2$$

$$2 = 2$$

yes

$x = 1, B$

$$(7) \frac{2x}{x-3} - \frac{2}{1} = \frac{6}{x^2-9}$$

$$\frac{\cancel{1}x}{x-3} \frac{2x}{x-3} - \frac{2}{1} = \frac{6}{(x+3)(x-3)}$$

$$\frac{2x(x-3)(x+3)}{x+3} - \frac{2(x-3)(x+3)}{1} = \frac{6(x-3)(x+3)}{(x+3)(x-3)}$$

$$2x(x+3) - 2(x-3)(x+3) = 6$$

$$2x^2 + 6x - 2(x^2 - 9) = 6$$

$$2x^2 + 6x - 2x^2 + 18 = 6$$

$$6x = -12$$

$$\boxed{x = -2, B}$$

$$(8) \frac{1}{x-2} + \frac{3}{x+3} = \frac{4}{x^2+x-6}$$

$$\frac{1}{x-2} + \frac{3}{x+3} = \frac{4}{(x-2)(x+3)} \quad \frac{\cancel{1}x}{x-2}$$

$$\frac{1(x-2)(x+3)}{x+3} + \frac{3(x-2)(x+3)}{x+3} = \frac{4(x-2)(x+3)}{(x-2)(x+3)}$$

$$x+3 + 3(x-2) = 4$$

$$x+3+3x-6=4$$

$$4x-3=4$$

$$4x=7$$

$$\boxed{x = \frac{7}{4}, D}$$

$$(9) \frac{1}{2}|2x-6| \geq 16$$

isolate

$$|2x-6| \geq 32$$

↑ outside case, 2 inequalities

$$2x-6 \leq -32$$

$$2x-6 \geq 32$$

$$2x \leq -26$$

$$2x \geq 38$$

$$x \leq -13$$

$$x \geq 19$$

$$\boxed{(-\infty, -13] \cup [19, \infty), B}$$

$$(10) \frac{1}{4}|5x+2| < 7$$

$$|5x+2| < 28$$

↑ inside case, double inequality

$$-28 < 5x+2 < 28$$

$$\begin{array}{ccc} -2 & & -2 \\ \hline -30 & < & 26 \\ \hline \end{array}$$

$$\frac{-30}{5} < \frac{5x}{5} < \frac{26}{5}$$

$$-6 < x < \frac{26}{5}$$

$$\boxed{(-6, \frac{26}{5}), C}$$

$$(11a) \left(\frac{27}{8}\right)^{\frac{5}{3}}$$

$$\left(\frac{8}{27}\right)^{\frac{5}{3}}$$

$$\left[\left(\frac{8}{27}\right)^{\frac{4}{3}}\right]^{\frac{5}{3}}$$

$$\left(\frac{3\sqrt{8}}{3\sqrt{27}}\right)^{\frac{5}{3}}$$

$$\left(\frac{2}{3}\right)^{\frac{5}{3}}$$

$$\frac{2^5}{3^5}$$

$$\boxed{\frac{32}{243}, C}$$

$$(11b)$$

$$(6x^3y^2)^3(3x)^{-3}$$

$$(6x^3y^2)^3$$

$$(3x)^{-3}$$

$$\frac{6^3(x^3)^3(y^2)^3}{3^3(x)^3}$$

$$216x^9y^6$$

$$\frac{216x^9y^6}{27x^3}$$

$$8x^6y^6$$

$$\frac{8x^6y^6}{1} = \boxed{8x^6y^6, C}$$

(12)  $g(x) = 2x^3 - 8x^2 - 2x + 5, g(-3)$

plug in:

$$g(-3) = 2(-3)^3 - 8(-3)^2 - 2(-3) + 5$$

$$= 2(-27) - 8(9) + 6 + 5$$

$$= -54 - 72 + 6 + 5$$

$$= \boxed{-115 \text{ A}}$$

or synth division:

$$\begin{array}{r|rrrr} -3 & 2 & -8 & -2 & 5 \\ & & -6 & 42 & -120 \\ \hline & 2 & -14 & 40 & -115 \end{array}$$

answer is remainder

(13)  $f(x) = 4 - x^2, g(x) = x + 2$

$$f(g(x)) = f(x+2) = 4 - (x+2)^2$$

$$= 4 - (x^2 + 4x + 4)$$

$$= 4 - x^2 - 4x - 4$$

$$= \boxed{-x^2 - 4x, \text{ A}}$$

(14)  $f(x) = x^2 + 4x + 5, g(x) = x - 7$

$$3g(f(-2)) \quad f(-2) = (-2)^2 + 4(-2) + 5$$

$$= 4 - 8 + 5 = 1$$

$$3g(1) \quad g(1) = (1) - 7 = -6$$

$$3(-6) = \boxed{-18, \text{ B}}$$

(15)  $f(x) = 3x^2 + 7x - 2, g(x) = 4x + 3$

$$(g-f)(x) = g(x) - f(x)$$

$$= (4x+3) - (3x^2+7x-2)$$

$$= 4x+3 - 3x^2 - 7x + 2$$

$$= \boxed{-3x^2 - 3x + 5, \text{ A}}$$

(16)  $f(x) = \frac{2x}{\sqrt{x+4}}$

D:  $x+4 > 0$  (not  $\geq$ , fraction)  
 $x > -4$

$$\boxed{(-4, \infty) \text{ B}}$$

(17)  $(x+1)(x^2-4) > 0$

$$(x+1)(x+2)(x-2) > 0$$

critical #'s:  $-2, -1, 2$

table or calculator: which regions between critical #'s are  $> 0$ ?

int.	test pt	test	$> 0$ ?
$(-\infty, -2)$	-3	$(-)(-)(-) = -$	no
$(-2, -1)$	$-\frac{3}{2}$	$(-)(+)(-) = +$	yes
$(-1, 2)$	0	$(+)(+)(-) = -$	no
$(2, \infty)$	3	$(+)(+)(+) = +$	yes

$$\boxed{(-2, -1) \cup (2, \infty), \text{ D}}$$

(can also plot to find x intervals where  $> 0$ )

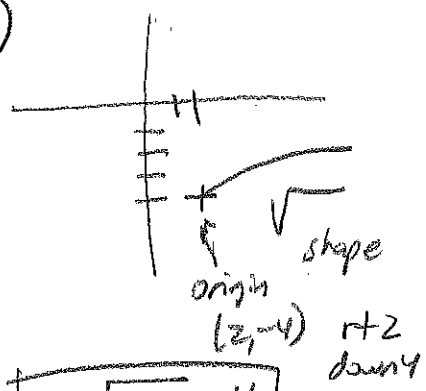
(18)  $f(x) = x^3$  to  $g(x) = (x+5)^3 - 9$

$$\boxed{\text{down 9, left 5, C}}$$

(19)  $f(x) = x^2$  to  $g(x) = -\frac{3}{4}(x-8)^2 + 10$

$$\boxed{\text{up 10, 8 right, flip vert (reflect over x-axis) vertical shrink D}}$$

20



$$y = \sqrt{x-2} - 4$$

A

21a)  $f(x) = 4x^2 + 8x - 2$   
 $f(-x) = 4(-x)^2 + 8(-x) - 2$   
 $f(-x) = 4x^2 - 8x - 2$

neither, D

21b)  $f(x) = |x| + 3$   
 $f(-x) = |-x| + 3$   
 $f(-x) = |x| + 3$   
 $f(-x) = f(x)$

even, A

21c)  $f(x) = x^3 - 2x$   
 $f(-x) = (-x)^3 - 2(-x)$   
 $f(-x) = -x^3 + 2x$   
 $f(-x) = -(x^3 - 2x)$   
 $f(-x) = -f(x)$

odd, B

23

$$\frac{3x-5}{x+4}$$

x-int (y=0)

$$\frac{3x-5}{x+4} = 0 \quad \text{fraction} = 0 \quad \text{when numerator} = 0$$

$$3x-5=0$$

$$3x=5$$

$$x = \frac{5}{3}$$

$$\left(\frac{5}{3}, 0\right) \quad C$$

22

inverse of  $f(x) = 2x-3$

$$y = 2x-3$$

$$x = 2y-3$$

$$x+3 = 2y$$

$$2y = x+3$$

$$y = \frac{1}{2}x + \frac{3}{2}$$

$$f^{-1}(x) = \frac{1}{2}x + \frac{3}{2}, B$$

24

$$2x-3 \overline{) 2x^2 - x + 1}$$

$$2x-3 \overline{) 4x^3 - 8x^2 + 5x - 2}$$

$$-(4x^3 - 6x^2)$$

$$-2x^2 + 5x$$

$$-(-2x^2 + 3x)$$

$$2x - 2$$

$$-(2x - 3)$$

$$2x^2 - x + 1 + \frac{1}{2x-3}, A$$

25

$(x+1)$  is zero, when  $x = -1$   
(place holder for  $\frac{1}{x+1}$  term)

$$-1 \overline{) 4 \ 0 \ -3 \ 5}$$

$$-4 \ 4 \ -1$$

$$4 \ -4 \ 1 \ 4$$

$$4x^2 - 4x + 1 + \frac{4}{x+1}, C$$

(26)  $f(x) = \frac{x^2-x}{x+1}$   $n=2$   $m=1$

$n > m$ , no horiz. asymptote  
 $n > m$  by exactly 1, so slant asympt.

$$\begin{array}{r} x+1 \overline{) x^2 - x + 0} \\ -(x^2 + x) \\ \hline -2x + 0 \\ -(-2x - 2) \\ \hline \neq \end{array}$$

$y = x - 2$  is slant asympt.  
C

(27)  $f(x) = \frac{2x-1}{x}$   $n=1$   $m=1$

$n = m$  horiz asymptote

$y = \frac{2}{1}$   
 $y = 2, D$

(28)  $f(x) = \frac{x-6}{x^2-4}$

Vertical asymptotes occur at holes in domain (where denominator = 0)

$x^2 - 4 = 0$   
 $(x+2)(x-2) = 0$

$x = 2, x = -2, A$

(29)  $\frac{8-7i}{1-2i}$

$\frac{(8-7i)(1+2i)}{(1-2i)(1+2i)}$  ← complex conjugate ( $i^2 = -1$ )

$\frac{8 + 16i - 7i - 14i^2}{1 + 2i - 2i - 4i^2} = \frac{8 + 9i - 14(-1)}{1 - 4(-1)}$

$\frac{8 + 9i + 14}{1 + 4} = \frac{22 + 9i}{5} = \frac{22}{5} + \frac{9}{5}i, D$

(30)  $(6-2i)(2-3i)$   
 $12 - 18i - 4i + 6i^2$   
 $12 - 22i + 6(-1)$  ( $i^2 = -1$ )  
 $12 - 22i - 6$   
 $6 - 22i, A$


(31) real zeros:  $f(x) = 6x^4 + 11x^3 + 2x^2 - 5x - 2$

plug in calculator to get a possible zero (x-intercept):

-1 looks like a zero

synth. division to verify:

$$\begin{array}{r|rrrrrr} -1 & 6 & 11 & 2 & -5 & -2 \\ & & -6 & -5 & 3 & 2 \\ \hline & 6 & 5 & -3 & -2 & 0 \end{array} \checkmark$$



$2/3$  also in all 4 given answers

$$\begin{array}{r|rrrr} \frac{2}{3} & 6 & 5 & -3 & -2 \\ & & 4 & 6 & 2 \\ \hline & 6 & 9 & 3 & 0 \end{array} \checkmark$$

resulting quadratic →  $6x^2 + 9x + 3 = 0$

factor a 3 out

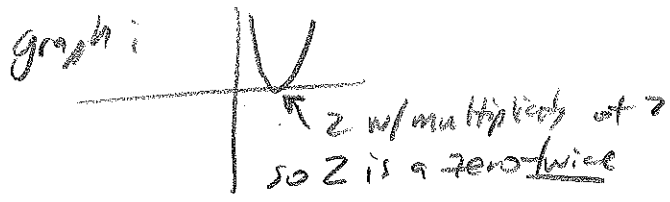
Zeros:  $-1$  (twice),  $\frac{2}{3}$ ,  $-\frac{1}{2}$ ,  $C$

$3(2x^2 + 3x + 1) = 0$   $\frac{m}{2} \frac{A}{3}$   
 $3(2x+2)(2x+1) = 0$   $\frac{2}{2} \frac{1}{1}$   
 $3(x+1)(2x+1) = 0$   
 $x = -1$   $2x+1 = 0$   
 $2x = -1$   $x = -1/2$

32) all zeros:  $f(x) = x^4 - 4x^3 + 8x^2 - 16x + 16$  deg. 4, should have 4 zeros

use calculator or look at answers, all have 2  
verify w/ synth. div

$$\begin{array}{r|rrrrr} 2 & 1 & -4 & 8 & -16 & 16 \\ & & 2 & -4 & 8 & -16 \\ \hline & 1 & -2 & 4 & -8 & 0 \end{array}$$



divide again by 2:

$$\begin{array}{r|rrrr} 2 & 1 & -2 & 4 & -8 \\ & & 2 & 0 & 8 \\ \hline & 1 & 0 & 4 & 0 \end{array}$$

$x^2 + 4 = 0$

solve this for complex zeros

$$\begin{aligned} x^2 + 4 &= 0 \\ x^2 &= -4 \\ x &= \pm\sqrt{-4} \\ x &= \pm\sqrt{4}i \\ x &= \pm 2i \end{aligned}$$

Zeros:  $\boxed{2, \pm 2i, C}$

33) zero @ 2 (m1), 0 (m2), -3 (m2)

$$\begin{aligned} (x-2)(x-0)^2(x+3)^2 \\ x^2(x-2)(x+3)^2 \\ [x^3-2x^2][x^2+6x+9] \\ x^5+6x^4+9x^3-2x^4-12x^3-18x^2 \\ \hline x^5+4x^4-3x^3-18x^2, B \end{aligned}$$

34) zeros: 0, -2, 3, 2i (also -2i) conjugate pairs

$$\begin{aligned} (x+2)(x-3)(x-2i)(x+2i) \quad (i^2 = -1) \\ [x^2-3x+2x-6][x^2-2xi+2xi-4i^2] \quad (+4) \\ (x^2-x-6)(x^2+4) \\ x^4-x^3-6x^2+4x^2-4x-24 \\ \hline x^4-x^3-2x^2-4x-24, C \end{aligned}$$

35) zeros from graph

- 2 (m1)
- 2 (m2)
- 3 (m1)

$(x+2)(x-2)^2(x-3)$  A, B, or D  
LH ↑ RH ↓  
leading term positive  
so B or D  
use 'trough' (-1, -6) to test

B -  $y = \frac{1}{6}(-1-2)^2(-1+2)(-1-3)$   
 $y = \frac{1}{6}(-3)^2(1)(-4) = -\frac{9 \cdot 1 \cdot 2}{6 \cdot 1} = -\frac{18}{6} = -3$  ✓

D -  $y = \frac{1}{4}(-1-2)^2(-1+2)(-1-3)$   
 $= \frac{1}{4}(-3)^2(1)(-4) = -\frac{9 \cdot 4}{4} = -9$  ✗

36) graph has zeros at:

- 1 (m2)
- 2 (m1)

$$(x+1)(x+1)(x-2)$$

↑  
 $x-a$   
 $\boxed{so a = -1, B}$

37 I. zeros:  $1(m3), -2(m1)$

C ↙ ↘

III. zeros:  $-1(m3), 2(m1)$

A ↙ ↘

V. zeros:  $-1(m2), 2(m1)$

D ↗ ↘

II. zeros:  $-1(m3), 2(m1)$

F ↗ ↗

IV. zeros:  $-1(m2), 2(m1)$

E ↙ ↗

VI. zeros:  $1(m2), -2(m1)$

B ↙ ↗

38  $\log_a y = x$   
 $a^x = y$  D

39  $\log_5 8 = \frac{\log_{10} 8}{\log_{10} 5} = 1.292$  D

40  $4 \ln 3 - \frac{1}{2} \ln(9)$   
 $\ln 3^4 - \ln 9^{1/2}$   
 $\ln 3^4 - \ln 3$   
 $\ln\left(\frac{3^4}{3}\right)$   
 $\ln(3^3)$   
 $\ln(27)$  C

41  $\log 2 + 3 \log 4$   
 $\log 2 + \log 4^3$   
 $\log(2 \cdot 4^3)$   
 $\log(2 \cdot 64)$   
 $\log 128$ , D

42  $\log^5 \sqrt{\frac{(x-1)^2}{(x-3)(x+2)^3}}$   
 $\log\left(\frac{(x-1)^2}{(x-3)(x+2)^3}\right)^{1/5}$   
 $\frac{1}{5} \log\left(\frac{(x-1)^2}{(x-3)(x+2)^3}\right)$   
 $\frac{1}{5} [\log(x-1)^2 - \log(x-3) - 3 \log(x+2)]$   
 $\frac{1}{5} [2 \log(x-1) - \log(x-3) - 3 \log(x+2)]$ , B

43  $\log\left(\frac{xy^3}{z^2w}\right)^7$   
 $7 \log\left(\frac{xy^3}{z^2w}\right)$   
 $7(\log x + \log y^3 - \log z^2 - \log w)$   
 $7(\log x + 3 \log y - 2 \log z - \log w)$ , A

(44)  $8^x = 40$   
 $\log_8 40 = x$   
 $x = \frac{\log 40}{\log 8}, D$

(45)  $5^x = 32$   
 $\log_5(5^x) = \log_5(32)$   
 $x = \log_5(32)$   
 $x = \frac{\log_5(32)}{\log_5(5)}$   
 $x \approx 2.115, C$

(46)  $4^{2x-7} = 1024$   
 $4^{2x-7} = 4^5$   
 $2x-7 = 5$   
 $2x = 12$   
 $x = 6, C$

(47)  $9^{5x} = 243^{3x-2}$   
 $(3^2)^{5x} = (3^5)^{3x-2}$   
 $(3)^{10x} = (3)^{15x-10}$   
 $10x = 15x - 10$   
 $10 = 5x$   
 $x = 2, C$

(48)  $\log_{10} 10^{3x-11} = 40$   
 $\log_{10} 10^{3x-11} = 40$   
 $3x-11 = 40$   
 $3x = 51$   
 $x = \frac{51}{3} = 17, D$

(49)  $\ln e^{5x+3} = 22$   
 $\ln e^{5x+3} = 22$   
 $5x+3 = 22$   
 $5x = 19$   
 $x = \frac{19}{5}, A$

(50)  $\log(1-2x) - \log(x-1) = 1$   
 $\log\left(\frac{1-2x}{x-1}\right) = 1$   
 $10^1 = \frac{1-2x}{x-1}$   
 $\frac{10}{1} \neq \frac{1-2x}{x-1}$   
 $10(x-1) = 1(1-2x)$   
 $10x - 10 = 1 - 2x$   
 $12x = 11$

(51)  $\log_4 x + \log_4(x+2) = \log_4(3x+56)$   
 $\log_4(x(x+2)) = \log_4(3x+56)$   
 $x(x+2) = 3x+56$   
 $x^2 + 2x = 3x + 56$   
 $x^2 - x - 56 = 0$   
 $(x-8)(x+7) = 0$   
 $x = 8$  (log(7))  
 $x = -7$  (log(-7))

$x = \frac{11}{12}$  but  $\log(x-1)$   
 $\log(\frac{11}{12}-1)$   
 $\log(-\frac{1}{12})$   
 not possible

So  $\boxed{\text{no sol'n, D}}$



52)  $P = \$10,000$   
 $r = .062$

t	A	$A = Pe^{rt}$
0	$P(10000)$	$A = 10000e^{.062t}$
t	$2P(20000)$	

$$\frac{20000}{10000} = \frac{10000}{10000} e^{.062t}$$

$$2 = e^{.062t}$$

$$\ln(2) = \ln(e^{.062t})$$

$$\frac{\ln 2}{.062} = \frac{.062t}{.062}$$

$$t = \frac{\ln 2}{.062} \approx 11.18 \text{ yrs, D}$$

53)  $P = ?$   
 $r = .0725$

$t = 6$   
 $A = 20,000$   
 $n = 4$  (quarterly)

$$A = P \left(1 + \frac{r}{n}\right)^{nt}$$

$$20000 = P \left(1 + \frac{.0725}{4}\right)^{4(6)}$$

$$\frac{20000}{\left(1 + \frac{.0725}{4}\right)^{24}} = \frac{P \left(1 + \frac{.0725}{4}\right)^{24}}{\left(1 + \frac{.0725}{4}\right)^{24}}$$

$$P = \frac{20000}{\left(1 + \frac{.0725}{4}\right)^{24}}$$

$$P = \$12,995.82, B$$

54)  $A = Pe^{rt}$

t	A
0	P
25	4P

← quadruple

$$\frac{4P}{P} = \frac{Pe^{r(25)}}{P}$$

$$4 = e^{r(25)}$$

$$\ln 4 = r(25)$$

$$r = \frac{\ln 4}{25} = .05545$$

$$5.5\%, B$$

55) I.  $5x^2 = 3y - 4$  (1 sq. term = Parabola, B)

II.  $7x^2 - 5x + 6y^2 + 7y = 9$  (2 sq terms, same sign, not =, Ellipse, C)

III.  $7x^2 - 5x + 7y^2 + 6y = 9$  (2 sq terms, same sign, =, Circle, D)

IV.  $7x^2 - 5x - 7y^2 + 6y = 9$  (2 sq terms, opp sign, Hyperbola, A)

56)  $2x^2 + 2y^2 - 8x + 12y + 2 = 0$

$$(2x^2 - 8x) + (2y^2 + 12y) = -2$$

$$2(x^2 - 4x + \underline{4}) + 2(y^2 + 6y + \underline{9}) = -2 + \underline{8} + \underline{18}$$

$$\frac{2(x-2)^2}{2} + \frac{2(y+3)^2}{2} = \frac{24}{2}$$

$$(x-2)^2 + (y+3)^2 = 12, A$$

57)  $x^2 - 2x + 8y = -9$

$$x^2 - 2x = -8y - 9$$

$$(x^2 - 2x + \underline{1}) = -8y - 9 + \underline{1}$$


$$(x-1)^2 = -8y - 8$$

$$(x-1)^2 = -8(y+1) \quad -8 = 4p$$

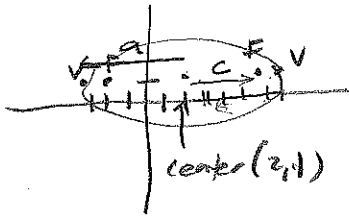
$$p = -2$$

A vertex: (1, -1)  
 focus: (1, -3)  
 directrix:  $y = 1$

$x^2$  type  $\cup$   
 neg.  $\cap$



58 V: (-3,1)(7,1) ellipse  
F: (-2,1)(6,1)



$$c=4$$

$$a=5$$

$$\text{So } c^2 = a^2 - b^2$$

$$16 = 25 - b^2$$

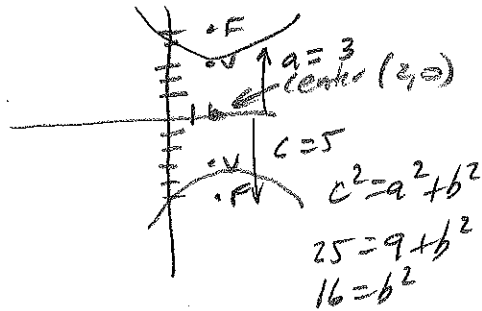
$$b^2 = 9$$

$$b = 3$$

$$\frac{(x-2)^2}{25} + \frac{(y-1)^2}{9} = 1$$

A

59 V: (2,3)(2,-3) Hyperbola  
F: (2,5)(2,-5)



$$c=5$$

$$c^2 = a^2 + b^2$$

$$25 = 9 + b^2$$

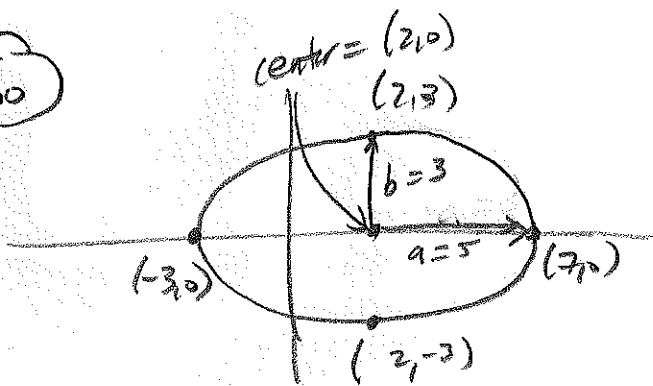
$$16 = b^2$$

$$\frac{(y-0)^2}{9} - \frac{(x-2)^2}{16} = 1$$

$$\frac{y^2}{9} - \frac{(x-2)^2}{16} = 1$$

B

60



$$\frac{(x-2)^2}{25} + \frac{(y+3)^2}{9} = 1$$

A

**Honors Algebra 3-4 Fall Semester Multiple Choice Final Review**

1. Factor the following completely:

a.  $2x^2 - 7x - 15$

A  $(2x-5)(x+3)$

B  $(2x+3)(x-5)$

C  $(2x+5)(x-3)$

D  $(2x-1)(x-15)$

b.  $25x^2 - 81y^2$

A  $(5x-9y)^2$

B  $(25x-81y)(x+y)$

C  $(5x-9)(5x+9)$

D  $(5x-9y)(5x+9y)$

2. Solve for  $x$ :  $10x^2 - 13x = 3$ .

A  $\frac{2}{3}, -5$

B  $-\frac{3}{2}, \frac{1}{5}$

C  $-1, \frac{3}{10}$

D  $\frac{3}{2}, -\frac{1}{5}$

3. Solve for  $x$ :  $2x^2 - 6x + 3 = 0$ .

A  $\frac{-3 \pm \sqrt{3}}{2}$

B  $\frac{-3 \pm \sqrt{15}}{2}$

C  $\frac{3 \pm \sqrt{3}}{2}$

D  $\frac{3 \pm \sqrt{15}}{2}$

4. Solve for  $x$ :  $(2x+6)^2 = 28$ .

A  $-3 \pm \sqrt{7}$

B  $3 \pm \sqrt{7}$

C  $\frac{-6 \pm 7\sqrt{2}}{2}$

D  $-3 \pm 2\sqrt{7}$

5. Solve for  $x$ :  $\sqrt{2x+7} - x = 2$ .

A -3

B 1

C -3, 1

D -1, 3

6. Solve for  $x$ :  $\sqrt{x-16}-1=2$

- A -5, 5
- B 17
- C 17, 25
- D 25

7. Solve for  $x$ :  $\frac{2x}{x-3}-2=\frac{6}{x^2-9}$ .

- A -12
- B -2
- C 2
- D 6

8. Solve for  $x$ :  $\frac{1}{x-2}+\frac{3}{x+3}=\frac{4}{x^2+x-6}$ .

- A  $-\frac{3}{4}$
- B  $\frac{4}{7}$
- C  $\frac{3}{4}$
- D  $\frac{7}{4}$

9. Solve for  $x$ :  $\frac{1}{2}|2x-6|\geq 16$ .

- A  $(-\infty, -13]$
- B  $(-\infty, -13] \cup [19, \infty)$
- C  $[-13, 19]$
- D  $[19, \infty)$

10. Solve for  $x$ :  $\frac{1}{4}|5x+2|<7$ .

- A  $(-\infty, -6) \cup \left(\frac{26}{5}, \infty\right)$
- B  $(-\infty, -6] \cup \left[\frac{26}{5}, \infty\right)$
- C  $\left(-6, \frac{26}{5}\right)$
- D  $\left[-6, \frac{26}{5}\right]$

11. Simplify the following expressions:

a.  $\left(\frac{27}{8}\right)^{-\frac{5}{3}}$

A  $-\frac{243}{32}$

B  $-\frac{32}{243}$

C  $\frac{32}{243}$

D  $\frac{243}{32}$

b.  $(6x^3y^2)^3(3x)^{-3}$

A  $2x^6y^6$

B  $8x^3y^6$

C  $8x^6y^6$

D  $5832x^6y^6$

12. For  $g(x) = 2x^3 - 8x^2 - 2x + 5$ , find  $g(-3)$ .

A -115

B -19

C 115

D 125

13. If  $f(x) = 4 - x^2$  and  $g(x) = x + 2$ , find  $f(g(x))$ .

A  $-x^2 - 4x$

B  $-x^3 - 2x^2 + 4x + 8$

C  $x^2 + 4x$

D  $x^3 + 2x^2 - 4x - 8$

14. If  $f(x) = x^2 + 4x + 5$  and  $g(x) = x - 7$ , find  $3g(f(-2))$ .

A -42

B -18

C -6

D 10

15. Given  $f(x) = 3x^2 + 7x - 2$  and  $g(x) = 4x + 3$ , find  $(g - f)(x)$ .

A  $-3x^2 - 3x + 5$

B  $3x^2 + 3x - 5$

C  $-3x^2 + 11x + 1$

D  $3x^2 - 4x - 5$

16. Find the domain of  $f(x) = \frac{2x}{\sqrt{x+4}}$ .

- A  $(-4, 4)$
- B  $(-4, \infty)$
- C  $[-4, \infty)$
- D  $(4, \infty)$

17. Find all the values of  $x$  such that  $f(x) = (x+1)(x^2 - 4) > 0$ .

- A  $(-\infty, -2) \cup (-1, 2)$
- B  $(-\infty, -2) \cup (2, \infty)$
- C  $(-2, -1) \cup (-1, 2)$
- D  $(-2, -1) \cup (2, \infty)$

18. Describe the transformation of the graph of  $f(x) = x^3$  for the graph of  $g(x) = (x+5)^3 - 9$ .

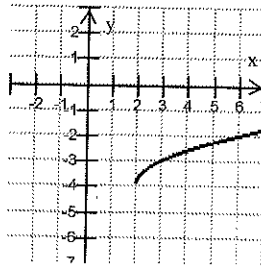
- A Horizontal shift 5 units to the right. Vertical shift 9 units down.
- B Horizontal shift 9 units to the right. Vertical shift 5 units up.
- C Horizontal shift 5 units to the left. Vertical shift 9 units down.
- D Horizontal shift 9 units to the left. Vertical shift 5 units up.

19. Describe the transformation of the graph of  $f(x) = x^2$  for the graph of  $g(x) = -\frac{3}{4}(x-8)^2 + 10$ .

- A Vertical Stretch. Reflects over the  $x$ -axis. Horizontal shift 8 units to the right. Vertical shift 10 units up.
- B Vertical Shrink. Reflects over the  $x$ -axis. Horizontal shift 8 units to the left. Vertical shift 10 units up.
- C Vertical Shrink. Horizontal shift 8 units to the right. Vertical shift 10 units up.
- D Vertical Shrink. Reflects over the  $x$ -axis. Horizontal shift 8 units to the right. Vertical shift 10 units up.

20. Write the equation for the given graph:

- A  $y = \sqrt{x-2} - 4$
- B  $y = \sqrt{x+4} - 2$
- C  $y = \sqrt{x+2} - 4$
- D  $y = \sqrt{x-4} - 2$



21. For each of the following functions determine if they are: even, odd, both or neither.

a.  $f(x) = 4x^2 + 8x - 2$       b.  $f(x) = |x| + 3$       c.  $f(x) = x^3 - 2x$

- A Even
- B Odd
- C Both
- D Neither

22. Find the inverse of:  $f(x) = 2x - 3$ .

A  $f^{-1}(x) = 3x - 2$

B  $f^{-1}(x) = \frac{1}{2}x + \frac{3}{2}$

C  $f^{-1}(x) = x + 3$

D  $f^{-1}(x) = \frac{x - 2}{3}$

23. Find the  $x$ -intercept(s):  $f(x) = \frac{3x - 5}{x + 4}$ .

A  $(-4, 0)$

B  $(-4, 0), \left(\frac{5}{3}, 0\right)$

C  $\left(\frac{5}{3}, 0\right)$

D  $\left(\frac{5}{3}, -4\right)$

24. Use long division to divide:  $(4x^3 - 8x^2 + 5x - 2) \div (2x - 3)$ .

A  $2x^2 - x + 1 + \frac{1}{2x - 3}$

B  $2x^2 - 7x + 13 - \frac{41}{2x - 3}$

C  $2x^2 - x + 1 - \frac{5}{x + 1}$

D  $4x^2 - 2x - 8 - \frac{14}{x + 1}$

25. Use synthetic division to divide:  $(4x^3 - 3x + 5) \div (x + 1)$ .

A  $4x^3 - 4x^2 + x + 4$

B  $4x^2 - 7x + 12$

C  $4x^2 - 4x + 1 + \frac{4}{x + 1}$

D  $4x^2 + 4x + 1 + \frac{6}{x + 1}$

26. Find the horizontal or slant asymptote(s):  $f(x) = \frac{x^2 - x}{x + 1}$

A  $x = -1$

B  $x = 0, x = 1$

C  $y = x - 2$

D  $y = 1$

27. Find the horizontal or slant asymptote(s):  $f(x) = \frac{2x-1}{x}$

- A  $x=0$
- B  $x=\frac{1}{2}$
- C  $y=2x$
- D  $y=2$

28. Find the vertical asymptote(s):  $f(x) = \frac{x-6}{x^2-4}$

- A  $x=+2$
- B  $x=2$
- C  $x=6$
- D  $y=0$

29. Divide, then express your answer in standard form:  $\frac{8-7i}{1-2i}$

- A  $-\frac{6}{5} - \frac{23}{5}i$
- B  $-\frac{22}{3} - 3i$
- C  $2 + \frac{23}{3}i$
- D  $\frac{22}{5} + \frac{9}{5}i$

30. Multiply, then express your answer in standard form:  $(6-2i)(2-3i)$ .

- A  $6 - 22i$
- B  $12 - 16i$
- C  $18 - 16i$
- D  $18 - 22i$

31. Find the real zeros of the function:  $f(x) = 6x^4 + 11x^3 + 2x^2 - 5x - 2$ .

- A  $-1, \frac{2}{3}$
- B  $-1, 0, \frac{2}{3}$
- C  $-1, -\frac{1}{2}, \frac{2}{3}$
- D  $-1, -\frac{2}{3}, -\frac{1}{2}, \frac{2}{3}$



32. Find all the zeros of the function:  $f(x) = x^4 - 4x^3 + 8x^2 - 16x + 16$ .

- A 2
- B -2, 2
- C  $2, \pm 2i$
- D  $\pm 2, \pm 2i$

33. Find a polynomial function that has a zero at 2, and a multiplicity of 2 for zeros at 0 and -3.

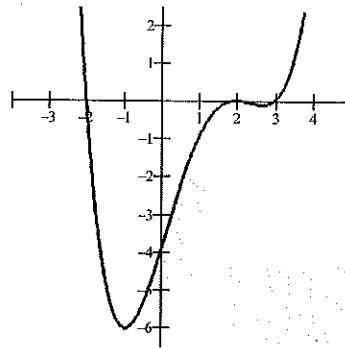
- A  $f(x) = x^3 + x^2 - 6x$
- B  $f(x) = x^5 + 4x^4 - 3x^3 - 18x^2$
- C  $f(x) = x^5 - 10x^4 - 3x^3 - 18x^2$
- D  $f(x) = x^5 - 4x^4 - 3x^3 + 18x^2$

34. Find a 4<sup>th</sup> degree polynomial that has the following zeros: -2, 3, 2i

- A  $f(x) = x^4 + x^3 - 2x^2 + 4x - 24$
- B  $f(x) = x^4 + x^3 - 10x^2 - 4x + 24$
- C  $f(x) = x^4 - x^3 - 2x^2 - 4x - 24$
- D  $f(x) = x^4 - x^3 - 8x^2 + 12x$

35. Which of the following is the equation for the given graph.

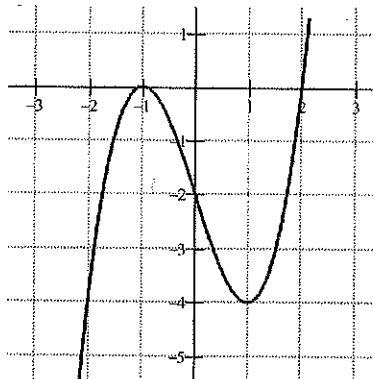
- A  $y = \frac{-1}{6}(x-2)^2(x+2)(x-3)$
- B  $y = \frac{1}{6}(x-2)^2(x+2)(x-3)$
- C  $y = \frac{1}{6}(x+2)^2(x-2)(x+3)$
- D  $y = \frac{1}{4}(x-2)^2(x+2)(x-3)$



36. The figure shows the graph of  $f(x) = (x+1)(x-2)(x-a)$ .

Determine the value of  $a$ .

- A -2
- B -1
- C 1
- D 2



37. Match the following equations with the appropriate graphs:

\_\_\_\_\_ I.  $y = \frac{-1}{2}(x-1)^3(x+2)$  \_\_\_\_\_

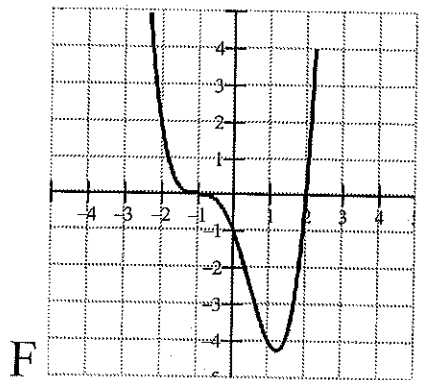
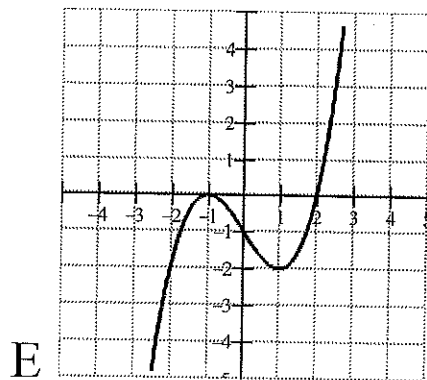
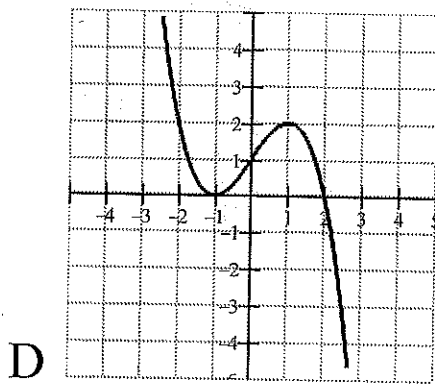
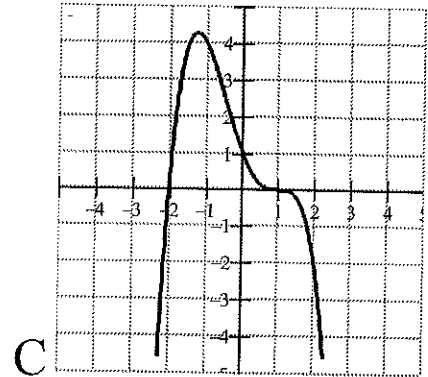
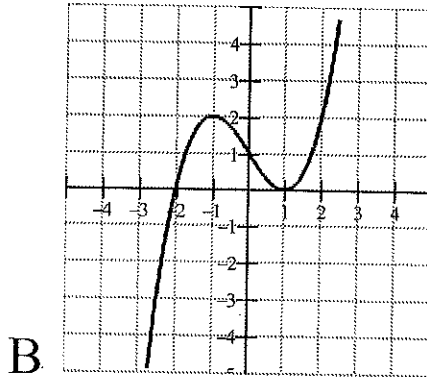
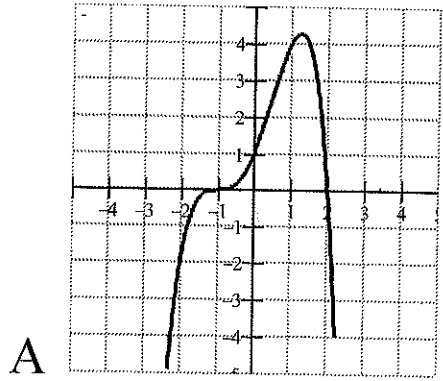
\_\_\_\_\_ II.  $y = \frac{1}{2}(x+1)^3(x-2)$

\_\_\_\_\_ III.  $y = -\frac{1}{2}(x+1)^3(x-2)$  \_\_\_\_\_

\_\_\_\_\_ IV.  $y = \frac{1}{2}(x+1)^2(x-2)$

\_\_\_\_\_ V.  $y = -\frac{1}{2}(x+1)^2(x-2)$  \_\_\_\_\_

\_\_\_\_\_ VI.  $y = \frac{1}{2}(x-1)^2(x+2)$



38. Write in exponential form:  $\log_a y = x$

A  $y^a = x$

B  $a^y = x$

C  $y^x = a$

D  $a^x = y$

39. Evaluate  $\log_5 8$  using the change of base formula

A 0.2041

B 0.7740

C 1.0586

D 1.2920

40. Rewrite  $4\ln 3 - \frac{1}{2}\ln(9)$  as a single logarithm.

- A  $\ln 2.7$
- B  $\ln 3$
- C  $\ln 27$
- D  $\ln 243$

41. Rewrite  $\log 2 + 3\log 4$  as a single logarithm.

- A  $\log 14$
- B  $\log 20$
- C  $\log 24$
- D  $\log 128$

42. Write as a sum, difference, or multiple of logarithms:  $\log 5 \sqrt{\frac{(x-1)^2}{(x-3)(x+2)^3}}$

- A  $\sqrt[5]{2\log(x-1) - \log(x-3) + 3\log(x+2)}$
- B  $\frac{1}{5}[2\log(x-1) - \log(x-3) - 3\log(x+2)]$
- C  $\sqrt[5]{\frac{2\log(x-1) + \log(x-3)}{3\log(x+2)}}$
- D  $\frac{1}{5}\left(\frac{2\log(x-1)}{\log(x-3) + 3\log(x+2)}\right)$

43. Write as a sum, difference, or multiple of logarithms:  $\log\left(\frac{xy^3}{z^2w}\right)^7$

- A  $7(\log x + 3\log y - 2\log z - \log w)$
- B  $7(\log x + 3\log y - 2\log z + \log w)$
- C  $7\left[\frac{\log x \cdot 3\log y}{2\log z \cdot \log w}\right]$
- D  $\left[\frac{\log x + 3\log y}{2\log z + \log w}\right]^7$

44. Solve  $8^x = 40$  for  $x$  in common log form.

- A  $\log \frac{8}{40}$
- B  $\log \frac{40}{8}$
- C  $\frac{\log 8}{\log 40}$
- D  $\frac{\log 40}{\log 8}$

45. Solve  $5^x = 32$  for  $x$  to the nearest hundredth.

- A .46
- B .81
- C 2.15
- D 6.40

46. Solve for  $x$ :  $4^{2x-7} = 1024$

- A  $\frac{1}{5}$
- B 5
- C 6
- D 131.5

47. Solve for  $x$ :  $9^{5x} = 243^{3x-2}$

- A  $\frac{2}{5}$
- B  $\frac{54}{76}$
- C 2
- D 27

48. Solve for  $x$ :  $\log_{10} 3^{x-11} = 40$

- A  $\frac{11 + \log 40}{3}$
- B  $\frac{40}{3 \log 10} - \frac{11}{3}$
- C 5
- D 17

49. Solve for  $x$ :  $\ln e^{5x+3} = 22$

- A  $\frac{19}{5}$
- B 5
- C  $\frac{22}{5 \ln e} + \frac{3}{5}$
- D  $\frac{-3 + \ln 22}{5}$

50. Solve for  $x$ :  $\log(1-2x) - \log(x-1) = 1$
- A  $\frac{1}{3}$   
 B  $\frac{2}{3}$   
 C  $\frac{11}{12}$   
 D no solution
51. Solve for  $x$ :  $\log_4 x + \log_4(x+2) = \log_4(3x+56)$
- A -54  
 B -7  
 C -7, 8  
 D 8
52. You win \$10,000 in the state lottery and deposit the earnings in a bank account. The money is invested at a rate 6.2% compounded continuously. How many years will it take to double your money?
- A .11 years  
 B 1.12 years  
 C 4.86 years  
 D 11.18 years
53. Find the initial amount invested at  $7\frac{1}{4}\%$  interest compounded quarterly if, after 6 years, it has grown to \$20,000.
- A \$12,945.29  
 B \$12,995.82  
 C \$13,141.54  
 D \$30,779.14
54. Determine the annual rate of interest compounded continuously for the sum of money in an account to quadruple in 25 years.
- A 2.4%  
 B 5.5%  
 C 5.7%  
 D 16%
55. Match the following conics:
- |            |                             |   |           |
|------------|-----------------------------|---|-----------|
| _____ I.   | $5x^2 = 3y - 4$             | A | Hyperbola |
| _____ II.  | $7x^2 - 5x + 6y^2 + 7y = 9$ | B | Parabola  |
| _____ III. | $7x^2 - 5x + 7y^2 + 6y = 9$ | C | Ellipse   |
| _____ IV.  | $7x^2 - 5x - 7y^2 + 6y = 9$ | D | Circle    |

56. Rewrite the equation of the circle in standard form:  $2x^2 + 2y^2 - 8x + 12y + 2 = 0$

A  $(x-2)^2 + (y+3)^2 = 12$

B  $(x+2)^2 + (y-3)^2 = 12$

C  $(x-2)^2 + (y+3)^2 = 15$

D  $(x-4)^2 + (y+6)^2 = 25$

57. Find the vertex, focus, and directrix of the following parabola:  $x^2 - 2x + 8y = -9$

A vertex: (1,-1); focus: (1,-3); directrix:  $y = 1$

B vertex: (1,-3); focus: (1,-1); directrix:  $y = 1$

C vertex: (1,-1); focus: (1,-3); directrix:  $x = 1$

D vertex: (1,-1); focus: (1,-3); directrix:  $y = -1$

58. Find the equation of the ellipse with vertices (-3,1) and (7,1), and foci (-2,1) and (6,1).

A  $\frac{(x-2)^2}{25} + \frac{(y-1)^2}{9} = 1$

B  $\frac{(x+2)^2}{25} + \frac{(y+1)^2}{9} = 1$

C  $\frac{(x-2)^2}{25} - \frac{(y-1)^2}{9} = 1$

D  $\frac{(x-2)^2}{5} + \frac{(y-1)^2}{3} = 1$

59. Find the equation of the hyperbola with vertices (2,3) and (2,-3), and foci (2,5) and (2,-5).

A  $\frac{y^2}{9} + \frac{(x-2)^2}{16} = 1$

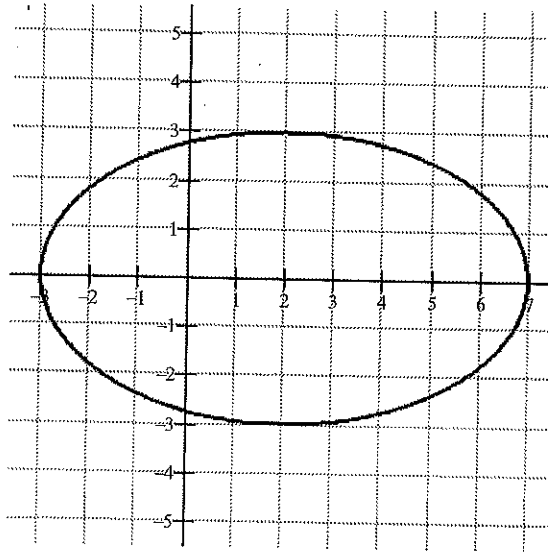
B  $\frac{y^2}{9} - \frac{(x-2)^2}{16} = 1$

C  $\frac{(x-2)^2}{16} - \frac{y^2}{9} = 1$

D  $\frac{y^2}{9} - \frac{(x+2)^2}{16} = 1$

60. Which equation represents the graph for the given ellipse?

- A  $\frac{(x-2)^2}{25} + \frac{y^2}{9} = 1$
- B  $\frac{(x-2)^2}{25} - \frac{y^2}{9} = 1$
- C  $\frac{(x-2)^2}{5} + \frac{y^2}{3} = 1$
- D  $\frac{(x-2)^2}{5} - \frac{y^2}{3} = 1$



# Honors Algebra 3-4 Fall Semester

## Multiple Choice Answer Key

(17A's; 17 B's; 17 C's; 19 D's; 1 E; 1 F)

1. B, D	11. C, C	21. D, A, B	31. C	41. D	51. D
2. D	12. A	22. B	32. C	42. B	52. D
3. C	13. A	23. C	33. B	43. A	53. B
4. A	14. B	24. A	34. C	44. D	54. B
5. B	15. A	25. C	35. B	45. C	55. B, C, D, A
6. D	16. B	26. C	36. B	46. C	56. A
7. B	17. D	27. D	37. C, F, A, E, D, B	47. C	57. A
8. D	18. C	28. A	38. D	48. D	58. A
9. B	19. D	29. D	39. D	49. A	59. B
10. C	20. A	30. A	40. C	50. D	60. A